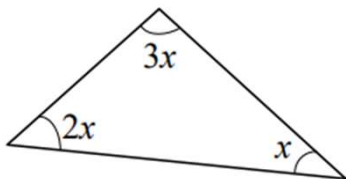
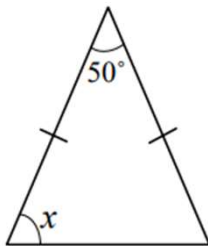
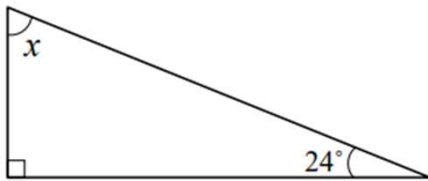
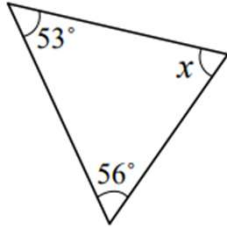


Triangle Sum Theorem Worksheets

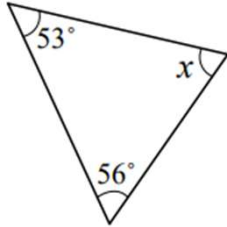
Calculate the value of x for the following figures:



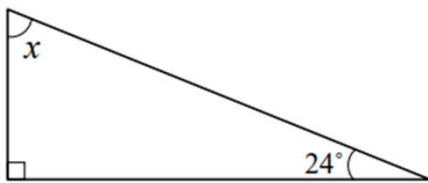
Go to [onlinemathlearning.com](https://www.onlinemathlearning.com) for more free math resources

Triangle Sum Theorem Worksheets

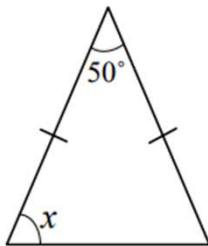
Calculate the value of x for the following figures:



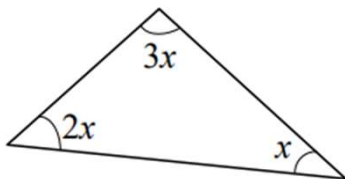
$$x = 71^\circ$$



$$x = 66^\circ$$



$$x = 65^\circ$$



$$x = 30^\circ$$

Go to [onlinemathlearning.com](https://www.onlinemathlearning.com) for more free math resources