


Ten Ones Worksheets

1-2. Circle ten. How many tens and ones?

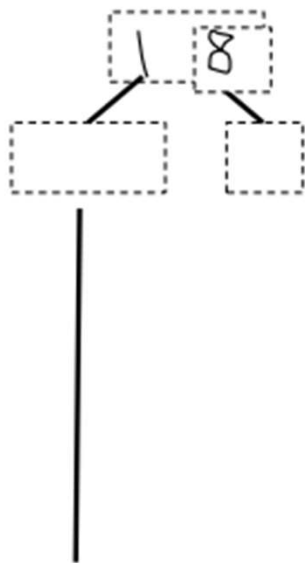
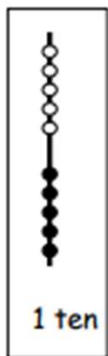


is the same as
 _____ ten and _____ ones.

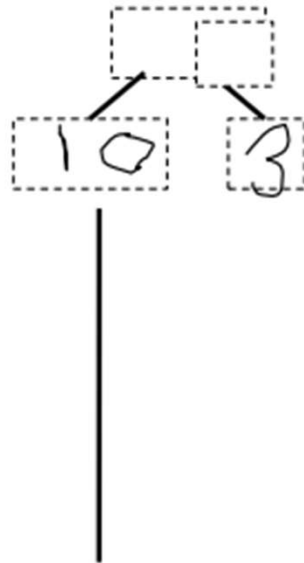


is the same as
 _____ ones and _____ ten.

3-4. Use the hide zero pictures to draw the ten and ones shown on the cards.



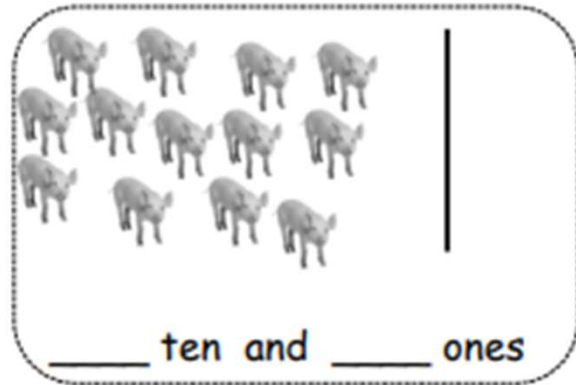
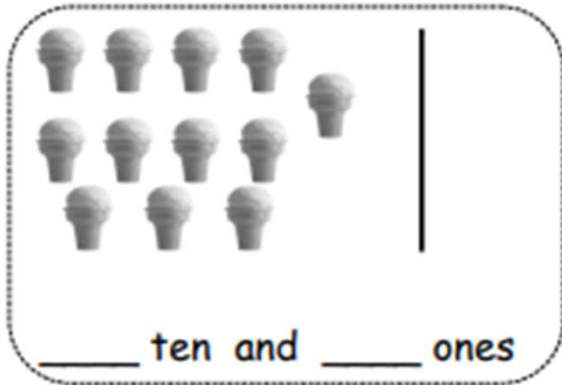
_____ ten and _____ ones



_____ ten and _____ ones


Ten Ones Worksheets

5-6. Draw using 5-groups columns to show the tens and ones.



7-8. Draw your own examples using 5-groups columns to show the tens and ones.

16



is the same as

___ ones and ___ ten.

19



is the same as

___ ten and ___ ones.

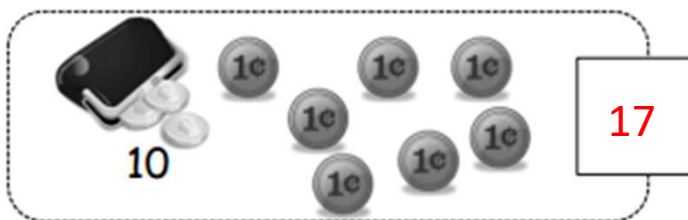
Ten Ones Worksheets

1-2. Circle ten. How many tens and ones?



is the same as

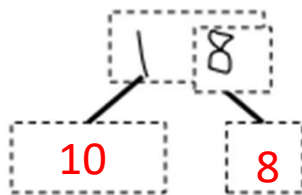
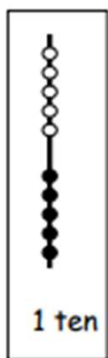
1 ten and 8 ones.



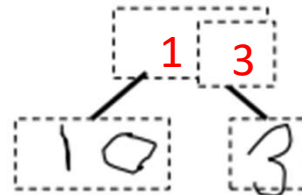
is the same as

7 ones and 1 ten.

3-4. Use the hide zero pictures to draw the ten and ones shown on the cards.



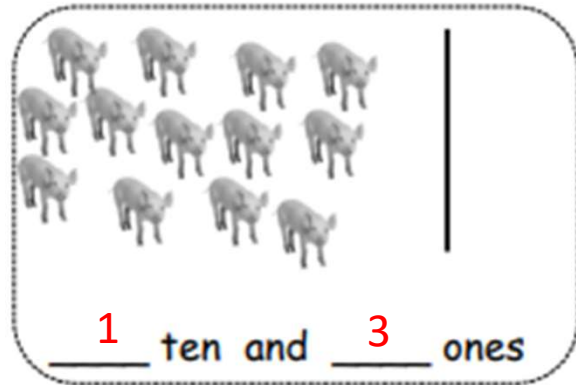
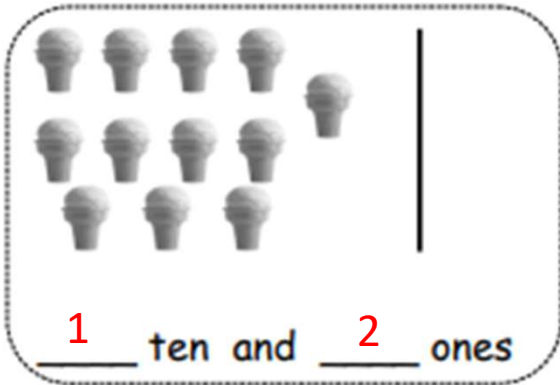
1 ten and 8 ones



1 ten and 3 ones

Ten Ones Worksheets

5-6. Draw using 5-groups columns to show the tens and ones.



7-8. Draw your own examples using 5-groups columns to show the tens and ones.

16



is the same as

6 ones and 1 ten.

19



is the same as

1 ten and 9 ones.