

Ten Ones Worksheets

Circle ten. How many tens and ones?

1.



is the same as
____ ten and ____ ones.

2.



is the same as
____ ten and ____ ones.

3.



is the same as
____ one and ____ tens.

4.



is the same as
____ ten and ____ ones.


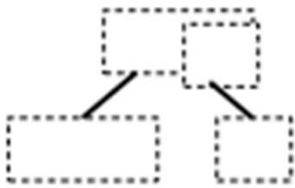
5.


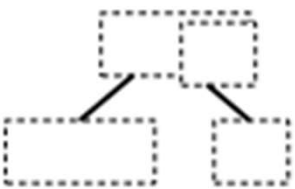



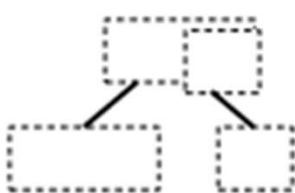
is the same as
____ ten and ____ ones.

Ten Ones Worksheets

Show the total, tens and ones with Hide Zero cards. Write how many tens and ones.

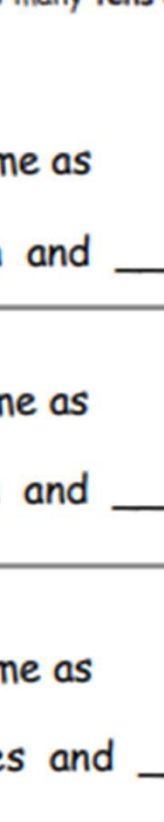
6.   is the same as
 ____ ten and ____ ones.


7.   is the same as
 ____ ten and ____ ones.

8.   is the same as
 ____ ones and ____ ten.

Draw the circles/beads in the ten and the extra ones. How many tens and ones?

9.   is the same as
 ____ ten and ____ ones.

10.  ____ ten and ____ ones

 ____ ten and ____ ones

Ten Ones Worksheets

Circle ten. How many tens and ones?

1.



15

is the same as

1 ten and 5 ones.

2.



12

is the same as

1 ten and 2 ones.

3.



17

is the same as

1 one and 7 tens.

4.



13

is the same as

1 ten and 3 ones.

5.



17


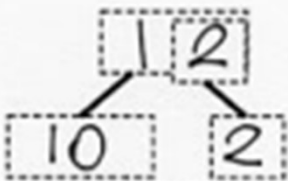
is the same as


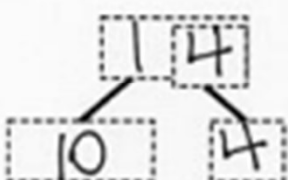
1 ten and 7 ones.


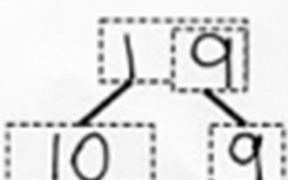
Ten Ones Worksheets

Show the total and the ten and ones with your Hide Zero cards.


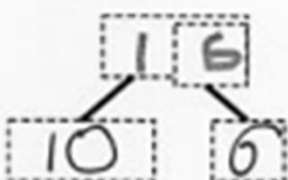
Write how many tens and ones.



7.  is the same as  is the same as 1 ten and 2 ones.

8.  is the same as  is the same as 1 ten and 4 ones.

9.  is the same as  is the same as 9 ones and 1 ten.

Draw the circles/beads in the ten and the extra ones. How many tens and ones?

10.  is the same as  is the same as 1 ten and 6 ones.

11.   1 ten and 2 ones

12.   1 ten and 5 ones