
















Telling Time

Write the time shown on each clock.

a.  _____ : _____	b.  _____ o'clock	c.  _____ o'clock
d.  _____ o'clock	e.  _____ :	f.  _____ o'clock
g.  _____ :	h.  _____ o'clock	i.  _____ :
j.  _____ o'clock	k.  _____ :	l.  _____ o'clock
m.  _____ o'clock	n.  _____ o'clock	o.  _____ o'clock

Telling Time

Write the time shown on each clock.

a.  5 : 00	b.  1 o'clock	c.  3 o'clock
d.  9 o'clock	e.  12 : 00	f.  7 o'clock
g.  4 : 00	h.  6 o'clock	i.  11 : 00
j.  10 o'clock	k.  6 : 00	l.  2 o'clock
m.  11 o'clock	n.  8 o'clock	o.  3 o'clock