


Learning Subtraction Worksheets (Take Away from 9)

Name _____

Date _____

Fill in the number sentences and number bonds.

There are 9 babies playing. 2 crawl away. How many babies are left?




$$9 - 2 = \underline{\quad}$$

There were 9 cars at the stop sign. 7 drove away. There are 2 cars left.



$$\underline{\quad} - \underline{\quad} = \underline{\quad}$$

There are 9 babies playing. 6 crawl away. How many babies are left?



$$\underline{\quad} - \underline{\quad} = \underline{\quad}$$

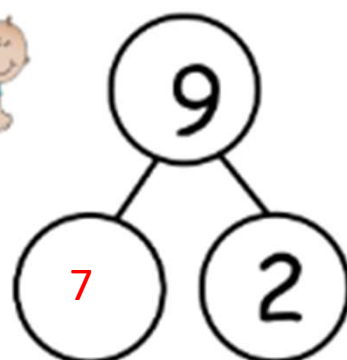
Learning Subtraction Worksheets (Take Away from 9)

Name _____

Date _____

Fill in the number sentences and number bonds.

There are 9 babies playing. 2 crawl away. How many babies are left?



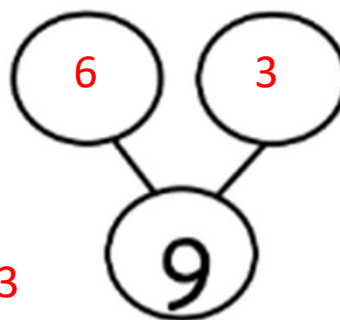
$$9 - 2 = \underline{\quad 7 \quad}$$

There were 9 cars at the stop sign. 7 drove away. There are 2 cars left.



$$\underline{\quad 9 \quad} - \underline{\quad 7 \quad} = \underline{\quad 2 \quad}$$

There are 9 babies playing. 6 crawl away. How many babies are left?



$$\underline{\quad 9 \quad} - \underline{\quad 6 \quad} = \underline{\quad 3 \quad}$$