


# Learning Subtraction Worksheets (Take Away from 7)

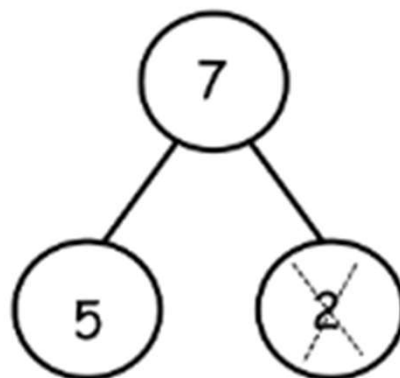
Name \_\_\_\_\_

Date \_\_\_\_\_

Say the number sentence. Fill in the blanks. Cross out the number.  
Cross out 2 dots.



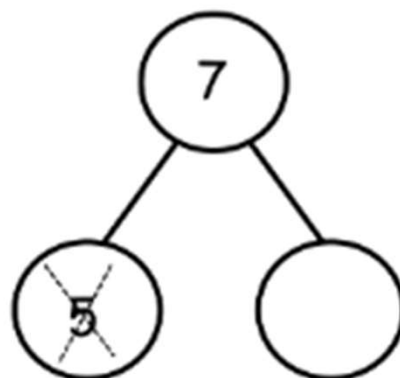
$$7 - 2 = \square$$



Cross out 5 dots.



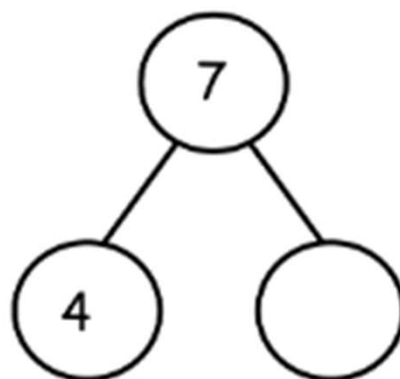
$$7 - 5 = \square$$



Cross out 4 dots.



$$7 - 4 = \square$$




# Learning Subtraction Worksheets (Take Away from 7)

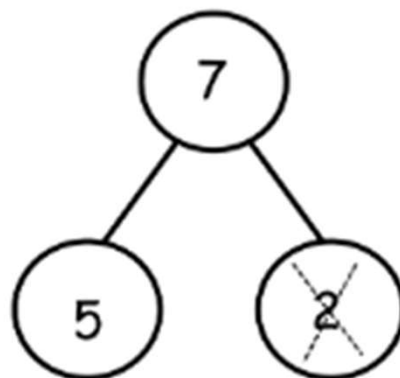
Name \_\_\_\_\_

Date \_\_\_\_\_

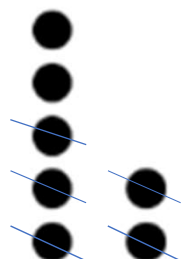
Say the number sentence. Fill in the blanks. Cross out the number.  
Cross out 2 dots.



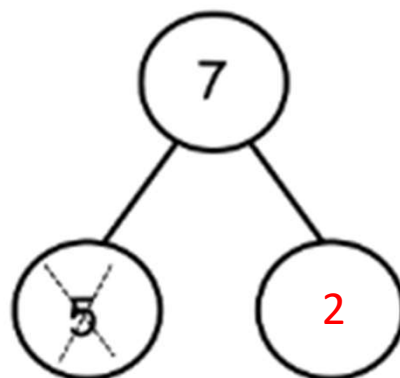
$$7 - 2 = \boxed{5}$$



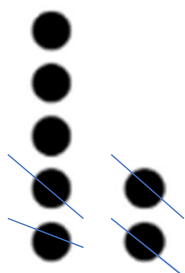
Cross out 5 dots.



$$7 - 5 = \boxed{2}$$



Cross out 4 dots.



$$7 - 4 = \boxed{3}$$

