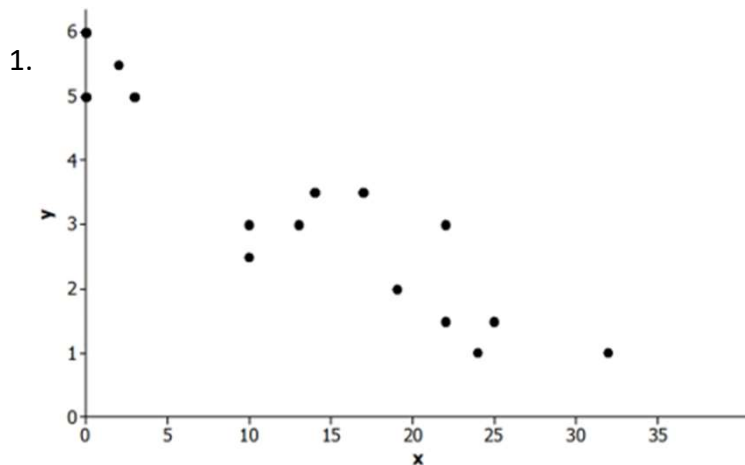


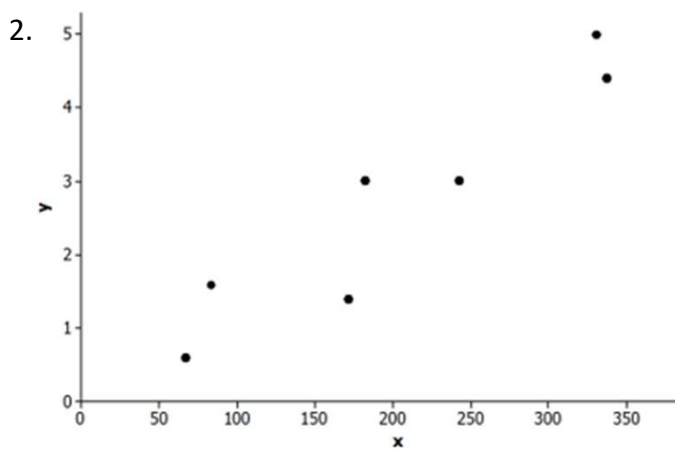
Scatter Plots



a) Is there a relationship?

c) If the relationship appears to be linear, is it a positive or a negative linear relationship?

b) If there is a relationship, does it appear to be linear?

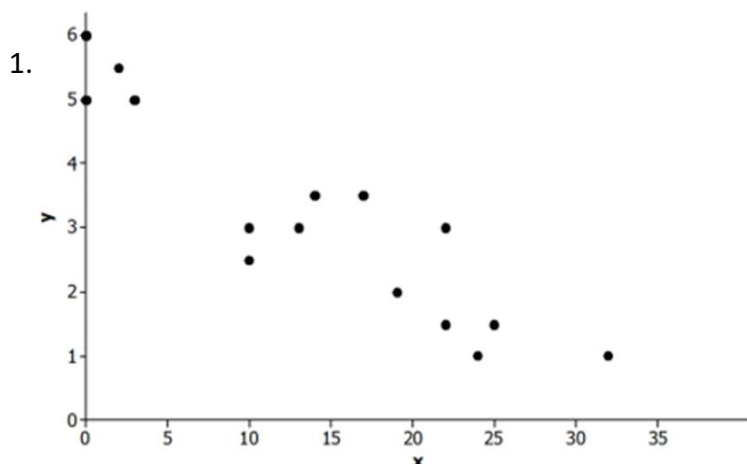


a) Is there a relationship?

c) If the relationship appears to be linear, is it a positive or a negative linear relationship?

b) If there is a relationship, does it appear to be linear?

Scatter Plots



a) Is there a relationship?

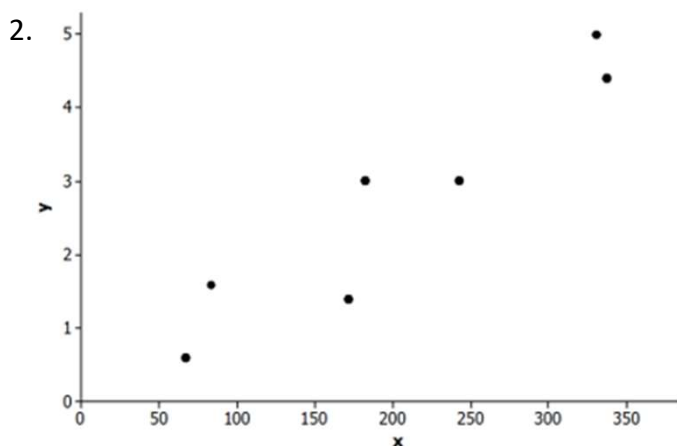
Yes

b) If there is a relationship, does it appear to be linear?

Yes

c) If the relationship appears to be linear, is it a positive or a negative linear relationship?

Negative



a) Is there a relationship?

Yes

b) If there is a relationship, does it appear to be linear?

Yes

c) If the relationship appears to be linear, is it a positive or a negative linear relationship?

Positive

Go to onlinemathlearning.com for more free math resources