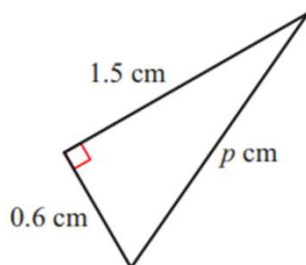
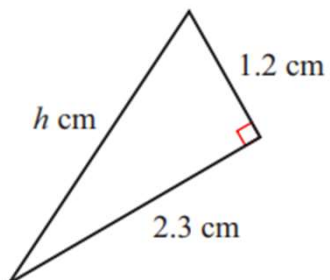
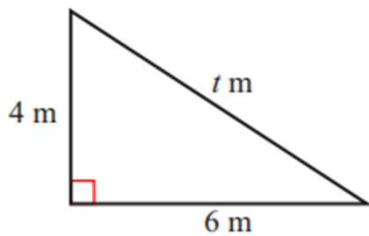
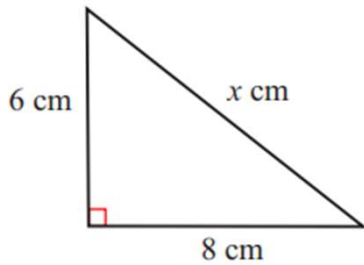


Pythagorean Theorem Worksheets

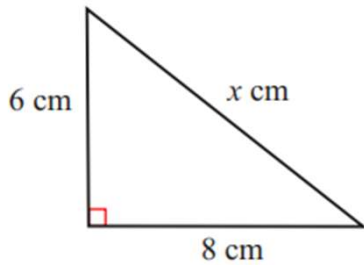
Find the length of the hypotenuse in each of the following triangles. Give your answer correct to three significant figures.



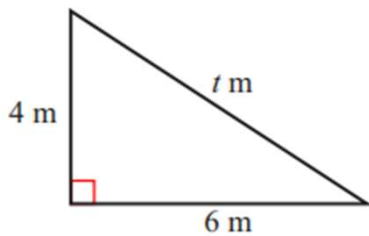
Go to [onlinemathlearning.com](https://www.onlinemathlearning.com) for more free math resources

Pythagorean Theorem Worksheets

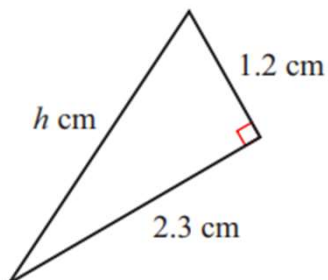
Find the length of the hypotenuse in each of the following triangles. Give your answer correct to three significant figures.



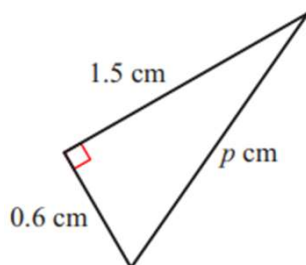
$$x = 10 \text{ cm}$$



$$t = 7.21 \text{ m}$$



$$h = 2.59 \text{ cm}$$



$$p = 1.62 \text{ cm}$$

Go to [onlinemathlearning.com](https://www.onlinemathlearning.com) for more free math resources