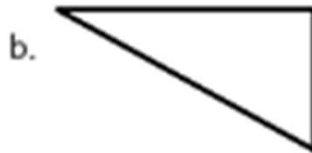


Polygon Worksheets

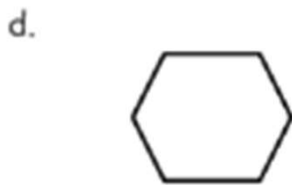
1. Count the number of sides and angles for each shape to identify each polygon. The polygon names in the word bank may be used more than once.

Hexagon Quadrilateral Triangle Pentagon

























Polygon Worksheets

1. Count the number of sides and angles for each shape to identify each polygon. The polygon names in the word bank may be used more than once.


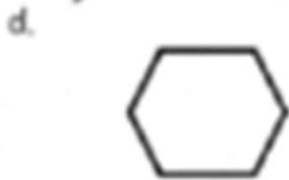
Hexagon Quadrilateral Triangle Pentagon



quadrilateral

triangle

pentagon



hexagon

triangle


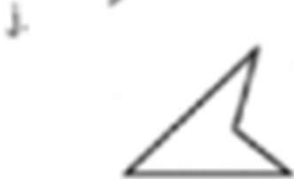
quadrilateral



quadrilateral

hexagon

pentagon



quadrilateral

quadrilateral

triangle