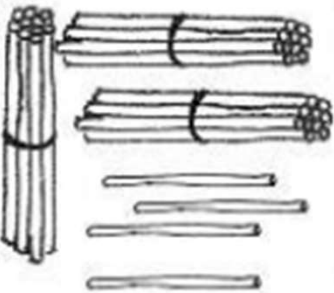


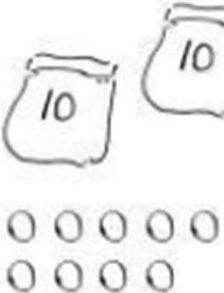
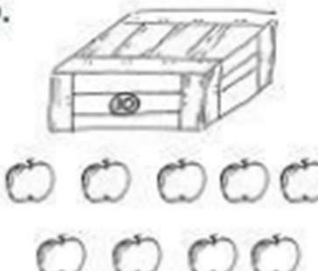



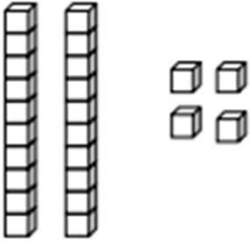
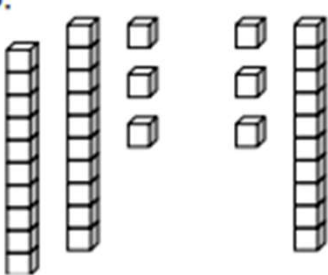
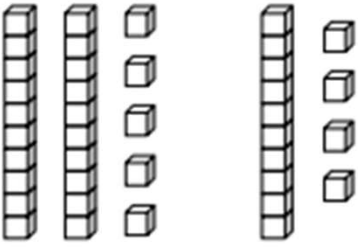
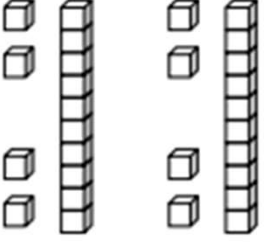
Place Value Chart Tens and Ones Worksheets

Write the tens and ones and complete the statement.

<p>1. </p> <table border="1" style="float: right; margin-left: 20px;"> <thead> <tr> <th style="padding: 5px;">tens</th> <th style="padding: 5px;">ones</th> </tr> </thead> <tbody> <tr> <td style="height: 60px;"></td> <td style="height: 60px;"></td> </tr> </tbody> </table> <p style="text-align: right; margin-top: 20px;">There are _____ straws.</p>	tens	ones			<p>2. </p> <table border="1" style="float: right; margin-left: 20px;"> <thead> <tr> <th style="padding: 5px;">tens</th> <th style="padding: 5px;">ones</th> </tr> </thead> <tbody> <tr> <td style="height: 60px;"></td> <td style="height: 60px;"></td> </tr> </tbody> </table> <p style="text-align: right; margin-top: 20px;">There are _____ peanuts.</p>	tens	ones		
tens	ones								
tens	ones								
<p>3. </p> <table border="1" style="float: right; margin-left: 20px;"> <thead> <tr> <th style="padding: 5px;">tens</th> <th style="padding: 5px;">ones</th> </tr> </thead> <tbody> <tr> <td style="height: 60px;"></td> <td style="height: 60px;"></td> </tr> </tbody> </table> <p style="text-align: right; margin-top: 20px;">There are _____ strawberries.</p>	tens	ones			<p>4. </p> <table border="1" style="float: right; margin-left: 20px;"> <thead> <tr> <th style="padding: 5px;">tens</th> <th style="padding: 5px;">ones</th> </tr> </thead> <tbody> <tr> <td style="height: 60px;"></td> <td style="height: 60px;"></td> </tr> </tbody> </table> <p style="text-align: right; margin-top: 20px;">There are _____ beads.</p>	tens	ones		
tens	ones								
tens	ones								
<p>5. </p> <table border="1" style="float: right; margin-left: 20px;"> <thead> <tr> <th style="padding: 5px;">tens</th> <th style="padding: 5px;">ones</th> </tr> </thead> <tbody> <tr> <td style="height: 60px;"></td> <td style="height: 60px;"></td> </tr> </tbody> </table> <p style="text-align: right; margin-top: 20px;">There are _____ apples.</p>	tens	ones			<p>6. </p> <table border="1" style="float: right; margin-left: 20px;"> <thead> <tr> <th style="padding: 5px;">tens</th> <th style="padding: 5px;">ones</th> </tr> </thead> <tbody> <tr> <td style="height: 60px;"></td> <td style="height: 60px;"></td> </tr> </tbody> </table> <p style="text-align: right; margin-top: 20px;">There are _____ carrots.</p>	tens	ones		
tens	ones								
tens	ones								

Place Value Chart Tens and Ones Worksheets

Write the tens and ones. Complete the statement.

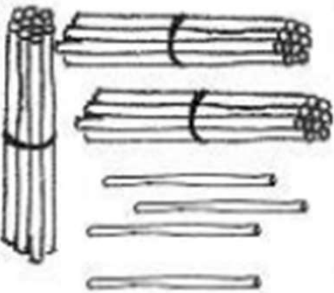



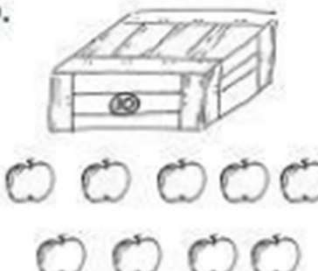

<p>7.</p>  <table border="1" style="margin-left: auto; margin-right: auto; text-align: center;"> <thead> <tr> <th style="padding: 2px;">tens</th> <th style="padding: 2px;">ones</th> </tr> </thead> <tbody> <tr> <td style="height: 40px;"> </td> <td style="height: 40px;"> </td> </tr> </tbody> </table> <p style="text-align: center;">There are _____ cubes.</p>	tens	ones			<p>8.</p>  <table border="1" style="margin-left: auto; margin-right: auto; text-align: center;"> <thead> <tr> <th style="padding: 2px;">tens</th> <th style="padding: 2px;">ones</th> </tr> </thead> <tbody> <tr> <td style="height: 40px;"> </td> <td style="height: 40px;"> </td> </tr> </tbody> </table> <p style="text-align: center;">There are _____ cubes.</p>	tens	ones		
tens	ones								
tens	ones								
<p>9.</p>  <table border="1" style="margin-left: auto; margin-right: auto; text-align: center;"> <thead> <tr> <th style="padding: 2px;">tens</th> <th style="padding: 2px;">ones</th> </tr> </thead> <tbody> <tr> <td style="height: 40px;"> </td> <td style="height: 40px;"> </td> </tr> </tbody> </table> <p style="text-align: center;">There are _____ cubes.</p>	tens	ones			<p>10.</p>  <table border="1" style="margin-left: auto; margin-right: auto; text-align: center;"> <thead> <tr> <th style="padding: 2px;">tens</th> <th style="padding: 2px;">ones</th> </tr> </thead> <tbody> <tr> <td style="height: 40px;"> </td> <td style="height: 40px;"> </td> </tr> </tbody> </table> <p style="text-align: center;">There are _____ cubes.</p>	tens	ones		
tens	ones								
tens	ones								

Write the missing numbers.

<p>11.</p> <table border="1" style="margin-left: auto; margin-right: auto; text-align: center;"> <thead> <tr> <th style="padding: 2px;">tens</th> <th style="padding: 2px;">ones</th> </tr> </thead> <tbody> <tr> <td style="height: 40px;"> </td> <td style="height: 40px;"> </td> </tr> </tbody> </table> ➔ 23 <hr style="width: 50px; margin-left: 10px; border: 0.5px solid black;"/>	tens	ones			<p>12.</p> <table border="1" style="margin-left: auto; margin-right: auto; text-align: center;"> <thead> <tr> <th style="padding: 2px;">tens</th> <th style="padding: 2px;">ones</th> </tr> </thead> <tbody> <tr> <td style="padding: 5px;">3</td> <td style="padding: 5px;">2</td> </tr> </tbody> </table> ➔ <hr style="width: 50px; margin-left: 10px; border: 0.5px solid black;"/>	tens	ones	3	2
tens	ones								
tens	ones								
3	2								
<p>13.</p> <table border="1" style="margin-left: auto; margin-right: auto; text-align: center;"> <thead> <tr> <th style="padding: 2px;">tens</th> <th style="padding: 2px;">ones</th> </tr> </thead> <tbody> <tr> <td style="padding: 5px;">0</td> <td style="padding: 5px;">9</td> </tr> </tbody> </table> ➔ <hr style="width: 50px; margin-left: 10px; border: 0.5px solid black;"/>	tens	ones	0	9	<p>14.</p> <table border="1" style="margin-left: auto; margin-right: auto; text-align: center;"> <thead> <tr> <th style="padding: 2px;">tens</th> <th style="padding: 2px;">ones</th> </tr> </thead> <tbody> <tr> <td style="padding: 5px;">4</td> <td style="padding: 5px;">0</td> </tr> </tbody> </table> ➔ <hr style="width: 50px; margin-left: 10px; border: 0.5px solid black;"/>	tens	ones	4	0
tens	ones								
0	9								
tens	ones								
4	0								

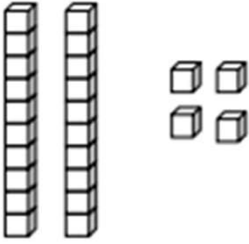
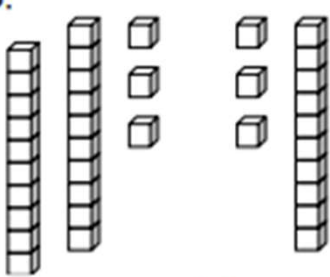
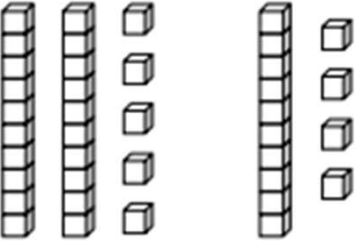
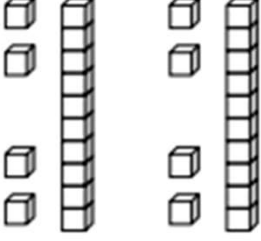
Place Value Chart Tens and Ones Worksheets

Write the tens and ones and complete the statement.

<p>1. </p> <table border="1" style="margin-left: auto; margin-right: auto; text-align: center;"> <thead> <tr> <th style="padding: 5px;">tens</th> <th style="padding: 5px;">ones</th> </tr> </thead> <tbody> <tr> <td style="font-size: 2em; color: red;">3</td> <td style="font-size: 2em; color: red;">4</td> </tr> </tbody> </table> <p style="text-align: center;">There are 34 straws.</p>	tens	ones	3	4	<p>2. </p> <table border="1" style="margin-left: auto; margin-right: auto; text-align: center;"> <thead> <tr> <th style="padding: 5px;">tens</th> <th style="padding: 5px;">ones</th> </tr> </thead> <tbody> <tr> <td style="font-size: 2em; color: red;">2</td> <td style="font-size: 2em; color: red;">3</td> </tr> </tbody> </table> <p style="text-align: center;">There are 23 peanuts.</p>	tens	ones	2	3
tens	ones								
3	4								
tens	ones								
2	3								
<p>3. </p> <table border="1" style="margin-left: auto; margin-right: auto; text-align: center;"> <thead> <tr> <th style="padding: 5px;">tens</th> <th style="padding: 5px;">ones</th> </tr> </thead> <tbody> <tr> <td style="font-size: 2em; color: red;">3</td> <td style="font-size: 2em; color: red;">6</td> </tr> </tbody> </table> <p style="text-align: center;">There are 36 strawberries.</p>	tens	ones	3	6	<p>4. </p> <table border="1" style="margin-left: auto; margin-right: auto; text-align: center;"> <thead> <tr> <th style="padding: 5px;">tens</th> <th style="padding: 5px;">ones</th> </tr> </thead> <tbody> <tr> <td style="font-size: 2em; color: red;">2</td> <td style="font-size: 2em; color: red;">9</td> </tr> </tbody> </table> <p style="text-align: center;">There are 29 beads.</p>	tens	ones	2	9
tens	ones								
3	6								
tens	ones								
2	9								
<p>5. </p> <table border="1" style="margin-left: auto; margin-right: auto; text-align: center;"> <thead> <tr> <th style="padding: 5px;">tens</th> <th style="padding: 5px;">ones</th> </tr> </thead> <tbody> <tr> <td style="font-size: 2em; color: red;">1</td> <td style="font-size: 2em; color: red;">9</td> </tr> </tbody> </table> <p style="text-align: center;">There are 19 apples.</p>	tens	ones	1	9	<p>6. </p> <table border="1" style="margin-left: auto; margin-right: auto; text-align: center;"> <thead> <tr> <th style="padding: 5px;">tens</th> <th style="padding: 5px;">ones</th> </tr> </thead> <tbody> <tr> <td style="font-size: 2em; color: red;">2</td> <td style="font-size: 2em; color: red;">6</td> </tr> </tbody> </table> <p style="text-align: center;">There are 26 carrots.</p>	tens	ones	2	6
tens	ones								
1	9								
tens	ones								
2	6								

Place Value Chart Tens and Ones Worksheets

Write the tens and ones. Complete the statement.

<p>7.</p>  <table border="1" data-bbox="547 365 759 551"><thead><tr><th>tens</th><th>ones</th></tr></thead><tbody><tr><td>2</td><td>4</td></tr></tbody></table> <p>There are <u>24</u> cubes.</p>	tens	ones	2	4	<p>8.</p>  <table border="1" data-bbox="1238 365 1453 551"><thead><tr><th>tens</th><th>ones</th></tr></thead><tbody><tr><td>3</td><td>6</td></tr></tbody></table> <p>There are <u>36</u> cubes.</p>	tens	ones	3	6
tens	ones								
2	4								
tens	ones								
3	6								
<p>9.</p>  <table border="1" data-bbox="547 734 759 920"><thead><tr><th>tens</th><th>ones</th></tr></thead><tbody><tr><td>3</td><td>9</td></tr></tbody></table> <p>There are <u>39</u> cubes.</p>	tens	ones	3	9	<p>10.</p>  <table border="1" data-bbox="1238 734 1453 920"><thead><tr><th>tens</th><th>ones</th></tr></thead><tbody><tr><td>2</td><td>8</td></tr></tbody></table> <p>There are <u>28</u> cubes.</p>	tens	ones	2	8
tens	ones								
3	9								
tens	ones								
2	8								

Write the missing numbers.

<p>11.</p> <table border="1" data-bbox="256 1205 469 1391"><thead><tr><th>tens</th><th>ones</th></tr></thead><tbody><tr><td>2</td><td>3</td></tr></tbody></table> → <u>23</u>	tens	ones	2	3	<p>12.</p> <table border="1" data-bbox="935 1205 1147 1391"><thead><tr><th>tens</th><th>ones</th></tr></thead><tbody><tr><td>3</td><td>2</td></tr></tbody></table> → <u>32</u>	tens	ones	3	2
tens	ones								
2	3								
tens	ones								
3	2								
<p>13.</p> <table border="1" data-bbox="256 1453 469 1639"><thead><tr><th>tens</th><th>ones</th></tr></thead><tbody><tr><td>0</td><td>9</td></tr></tbody></table> → <u>9</u>	tens	ones	0	9	<p>14.</p> <table border="1" data-bbox="935 1453 1147 1639"><thead><tr><th>tens</th><th>ones</th></tr></thead><tbody><tr><td>4</td><td>0</td></tr></tbody></table> → <u>40</u>	tens	ones	4	0
tens	ones								
0	9								
tens	ones								
4	0								