









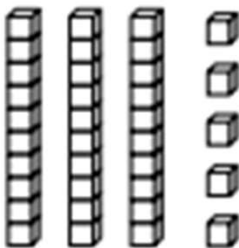
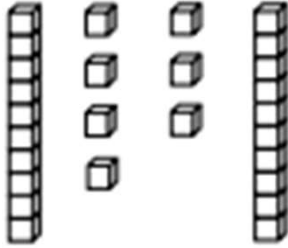
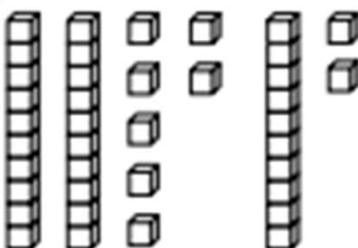
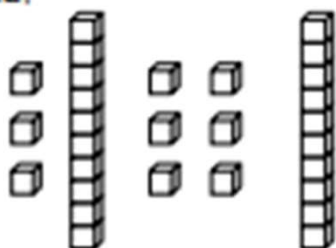
Place Value Chart Tens and Ones Worksheets

Write the tens and ones and say the numbers. Complete the statement.

<p>1.</p>  <p style="text-align: center;">17 = _____ ten _____ ones</p>	<p>2.</p>  <p style="text-align: center;">26 = _____ tens _____ ones</p>								
<p>3.</p>  <p style="text-align: center;">28 = _____ tens _____ ones</p>	<p>4.</p>  <p style="text-align: center;">_____ tens _____ ones = 33</p>								
<p>5.</p>  <table border="1" style="float: right; margin-left: 20px;"> <thead> <tr> <th style="padding: 5px;">tens</th> <th style="padding: 5px;">ones</th> </tr> </thead> <tbody> <tr> <td style="height: 40px;"></td> <td style="height: 40px;"></td> </tr> </tbody> </table> <p style="text-align: center;">There are _____ balloons.</p>	tens	ones			<p>6.</p>  <table border="1" style="float: right; margin-left: 20px;"> <thead> <tr> <th style="padding: 5px;">tens</th> <th style="padding: 5px;">ones</th> </tr> </thead> <tbody> <tr> <td style="height: 40px;"></td> <td style="height: 40px;"></td> </tr> </tbody> </table> <p style="text-align: center;">There are _____ flowers.</p>	tens	ones		
tens	ones								
tens	ones								
<p>7.</p>  <table border="1" style="float: right; margin-left: 20px;"> <thead> <tr> <th style="padding: 5px;">tens</th> <th style="padding: 5px;">ones</th> </tr> </thead> <tbody> <tr> <td style="height: 40px;"></td> <td style="height: 40px;"></td> </tr> </tbody> </table> <p style="text-align: center;">There are _____ marbles.</p>	tens	ones			<p>8.</p>  <table border="1" style="float: right; margin-left: 20px;"> <thead> <tr> <th style="padding: 5px;">tens</th> <th style="padding: 5px;">ones</th> </tr> </thead> <tbody> <tr> <td style="height: 40px;"></td> <td style="height: 40px;"></td> </tr> </tbody> </table> <p style="text-align: center;">There are _____ peanuts.</p>	tens	ones		
tens	ones								
tens	ones								

Place Value Chart Tens and Ones Worksheets

Write the tens and ones. Complete the statement.









<p>9.</p>  <table border="1" style="margin-left: 20px; border-collapse: collapse; width: 100px; height: 80px;"> <thead> <tr> <th style="padding: 2px;">tens</th> <th style="padding: 2px;">ones</th> </tr> </thead> <tbody> <tr> <td style="height: 40px;"></td> <td style="height: 40px;"></td> </tr> </tbody> </table> <p style="text-align: center;">There are _____ cubes.</p>	tens	ones			<p>10.</p>  <table border="1" style="margin-left: 20px; border-collapse: collapse; width: 100px; height: 80px;"> <thead> <tr> <th style="padding: 2px;">tens</th> <th style="padding: 2px;">ones</th> </tr> </thead> <tbody> <tr> <td style="height: 40px;"></td> <td style="height: 40px;"></td> </tr> </tbody> </table> <p style="text-align: center;">There are _____ cubes.</p>	tens	ones		
tens	ones								
tens	ones								
<p>11.</p>  <table border="1" style="margin-left: 20px; border-collapse: collapse; width: 100px; height: 80px;"> <thead> <tr> <th style="padding: 2px;">tens</th> <th style="padding: 2px;">ones</th> </tr> </thead> <tbody> <tr> <td style="height: 40px;"></td> <td style="height: 40px;"></td> </tr> </tbody> </table> <p style="text-align: center;">There are _____ cubes.</p>	tens	ones			<p>12.</p>  <table border="1" style="margin-left: 20px; border-collapse: collapse; width: 100px; height: 80px;"> <thead> <tr> <th style="padding: 2px;">tens</th> <th style="padding: 2px;">ones</th> </tr> </thead> <tbody> <tr> <td style="height: 40px;"></td> <td style="height: 40px;"></td> </tr> </tbody> </table> <p style="text-align: center;">There are _____ cubes.</p>	tens	ones		
tens	ones								
tens	ones								

Write the missing numbers.

<p>13.</p> <table border="1" style="margin-left: 20px; border-collapse: collapse; width: 100px; height: 80px;"> <thead> <tr> <th style="padding: 2px;">tens</th> <th style="padding: 2px;">ones</th> </tr> </thead> <tbody> <tr> <td style="height: 40px;"></td> <td style="height: 40px;"></td> </tr> </tbody> </table> ➔ 35	tens	ones			<p>14.</p> <table border="1" style="margin-left: 20px; border-collapse: collapse; width: 100px; height: 80px;"> <thead> <tr> <th style="padding: 2px;">tens</th> <th style="padding: 2px;">ones</th> </tr> </thead> <tbody> <tr> <td style="text-align: center; font-size: 1.5em;">2</td> <td style="text-align: center; font-size: 1.5em;">7</td> </tr> </tbody> </table> ➔ 	tens	ones	2	7
tens	ones								
tens	ones								
2	7								
<p>15.</p> <table border="1" style="margin-left: 20px; border-collapse: collapse; width: 100px; height: 80px;"> <thead> <tr> <th style="padding: 2px;">tens</th> <th style="padding: 2px;">ones</th> </tr> </thead> <tbody> <tr> <td style="text-align: center; font-size: 1.5em;">3</td> <td style="text-align: center; font-size: 1.5em;">9</td> </tr> </tbody> </table> ➔ 	tens	ones	3	9	<p>16.</p> <table border="1" style="margin-left: 20px; border-collapse: collapse; width: 100px; height: 80px;"> <thead> <tr> <th style="padding: 2px;">tens</th> <th style="padding: 2px;">ones</th> </tr> </thead> <tbody> <tr> <td style="height: 40px;"></td> <td style="height: 40px;"></td> </tr> </tbody> </table> ➔ 29	tens	ones		
tens	ones								
3	9								
tens	ones								
<p>17.</p> <table border="1" style="margin-left: 20px; border-collapse: collapse; width: 100px; height: 80px;"> <thead> <tr> <th style="padding: 2px;">tens</th> <th style="padding: 2px;">ones</th> </tr> </thead> <tbody> <tr> <td style="height: 40px;"></td> <td style="text-align: center; font-size: 1.5em;">0</td> </tr> </tbody> </table> ➔ 40	tens	ones		0	<p>18.</p> <table border="1" style="margin-left: 20px; border-collapse: collapse; width: 100px; height: 80px;"> <thead> <tr> <th style="padding: 2px;">tens</th> <th style="padding: 2px;">ones</th> </tr> </thead> <tbody> <tr> <td style="height: 40px;"></td> <td style="height: 40px;"></td> </tr> </tbody> </table> ➔ 9	tens	ones		
tens	ones								
	0								
tens	ones								


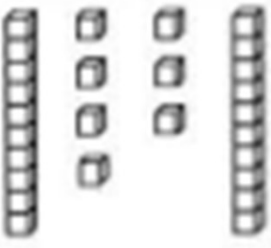


Place Value Chart Tens and Ones Worksheets

Write the tens and ones and say the numbers. Complete the statement.

<p>1.</p>  <p style="text-align: center;">$17 = \underline{1} \text{ ten } \underline{7} \text{ ones}$</p>	<p>2.</p>  <p style="text-align: center;">$26 = \underline{2} \text{ tens } \underline{6} \text{ ones.}$</p>								
<p>3.</p>  <p style="text-align: center;">$28 = \underline{2} \text{ tens } \underline{8} \text{ ones}$</p>	<p>4.</p>  <p style="text-align: center;">$\underline{3} \text{ tens } \underline{3} \text{ ones} = 33$</p>								
<p>5.</p>  <table border="1" style="float: right; margin-left: 20px;"> <thead> <tr> <th>tens</th> <th>ones</th> </tr> </thead> <tbody> <tr> <td style="text-align: center; font-size: 2em;">1</td> <td style="text-align: center; font-size: 2em;">4</td> </tr> </tbody> </table> <p style="text-align: center;">There are <u>14</u> balloons.</p>	tens	ones	1	4	<p>6.</p>  <table border="1" style="float: right; margin-left: 20px;"> <thead> <tr> <th>tens</th> <th>ones</th> </tr> </thead> <tbody> <tr> <td style="text-align: center; font-size: 2em;">2</td> <td style="text-align: center; font-size: 2em;">8</td> </tr> </tbody> </table> <p style="text-align: center;">There are <u>28</u> flowers.</p>	tens	ones	2	8
tens	ones								
1	4								
tens	ones								
2	8								
<p>7.</p>  <table border="1" style="float: right; margin-left: 20px;"> <thead> <tr> <th>tens</th> <th>ones</th> </tr> </thead> <tbody> <tr> <td style="text-align: center; font-size: 2em;">2</td> <td style="text-align: center; font-size: 2em;">5</td> </tr> </tbody> </table> <p style="text-align: center;">There are <u>25</u> marbles.</p>	tens	ones	2	5	<p>8.</p>  <table border="1" style="float: right; margin-left: 20px;"> <thead> <tr> <th>tens</th> <th>ones</th> </tr> </thead> <tbody> <tr> <td style="text-align: center; font-size: 2em;">3</td> <td style="text-align: center; font-size: 2em;">9</td> </tr> </tbody> </table> <p style="text-align: center;">There are <u>39</u> peanuts.</p>	tens	ones	3	9
tens	ones								
2	5								
tens	ones								
3	9								

Place Value Chart Tens and Ones Worksheets

Write the tens and ones. Complete the statement.

9.  <table border="1" data-bbox="574 358 766 537"><thead><tr><th>tens</th><th>ones</th></tr></thead><tbody><tr><td>3</td><td>5</td></tr></tbody></table> <p>There are <u>35</u> cubes.</p>	tens	ones	3	5	10.  <table border="1" data-bbox="1228 358 1420 537"><thead><tr><th>tens</th><th>ones</th></tr></thead><tbody><tr><td>2</td><td>7</td></tr></tbody></table> <p>There are <u>27</u> cubes.</p>	tens	ones	2	7
tens	ones								
3	5								
tens	ones								
2	7								
11.  <table border="1" data-bbox="574 716 766 896"><thead><tr><th>tens</th><th>ones</th></tr></thead><tbody><tr><td>3</td><td>9</td></tr></tbody></table> <p>There are <u>39</u> cubes.</p>	tens	ones	3	9	12.  <table border="1" data-bbox="1228 716 1420 896"><thead><tr><th>tens</th><th>ones</th></tr></thead><tbody><tr><td>2</td><td>9</td></tr></tbody></table> <p>There are <u>29</u> cubes.</p>	tens	ones	2	9
tens	ones								
3	9								
tens	ones								
2	9								

Write the missing number

13. <table border="1" data-bbox="303 1164 494 1344"><thead><tr><th>tens</th><th>ones</th></tr></thead><tbody><tr><td>3</td><td>5</td></tr></tbody></table> → <u>35</u>	tens	ones	3	5	14. <table border="1" data-bbox="941 1164 1133 1344"><thead><tr><th>tens</th><th>ones</th></tr></thead><tbody><tr><td>2</td><td>7</td></tr></tbody></table> → <u>27</u>	tens	ones	2	7
tens	ones								
3	5								
tens	ones								
2	7								
15. <table border="1" data-bbox="303 1411 494 1590"><thead><tr><th>tens</th><th>ones</th></tr></thead><tbody><tr><td>3</td><td>9</td></tr></tbody></table> → <u>39</u>	tens	ones	3	9	16. <table border="1" data-bbox="941 1411 1133 1590"><thead><tr><th>tens</th><th>ones</th></tr></thead><tbody><tr><td>2</td><td>9</td></tr></tbody></table> → <u>29</u>	tens	ones	2	9
tens	ones								
3	9								
tens	ones								
2	9								
17. <table border="1" data-bbox="303 1646 494 1825"><thead><tr><th>tens</th><th>ones</th></tr></thead><tbody><tr><td>4</td><td>0</td></tr></tbody></table> → <u>40</u>	tens	ones	4	0	18. <table border="1" data-bbox="941 1646 1133 1825"><thead><tr><th>tens</th><th>ones</th></tr></thead><tbody><tr><td>0</td><td>9</td></tr></tbody></table> → <u>9</u>	tens	ones	0	9
tens	ones								
4	0								
tens	ones								
0	9								