





One Less Than

<p>How many kites?</p>  <p><input type="text"/></p>	<p>Draw a set of suns that has 1 less. How many suns?</p> <p><input type="text"/></p>
<p>How many hot air balloons?</p>  <p><input type="text"/></p>	<p>Draw a set of clouds that has 1 less. How many clouds?</p> <p><input type="text"/></p>
<p>How many octopi?</p>  <p><input type="text"/></p>	<p>Draw a set of sharks that has 1 less. How many sharks?</p> <p><input type="text"/></p>
<p>How many chicks?</p>  <p><input type="text"/></p>	<p>Draw a set of worms that has 1 less. How many worms?</p> <p><input type="text"/></p>