

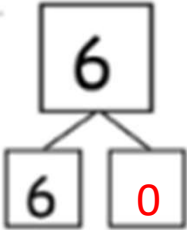
# Number Bonds 6

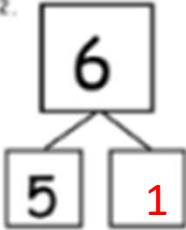
Fill in the missing numbers.


1.		2.		3.		4.		5.	
6.		7.		8.		9.		10.	
11.		12.		13.		14.		15.	
16.		17.		18.		19.		20.	
21.		22.		23.		24.		25.	

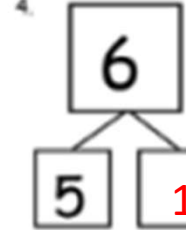
# Number Bonds 6

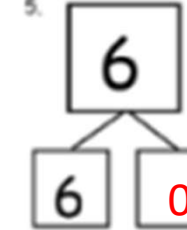
Fill in the missing numbers.

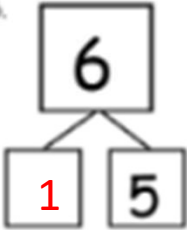
1. 

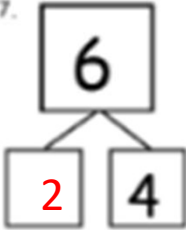
2. 

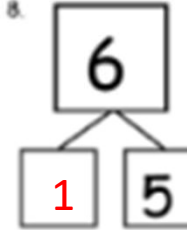
3. 

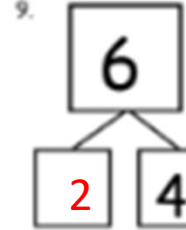
4. 

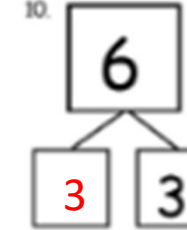
5. 

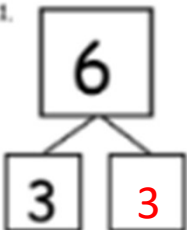
6. 

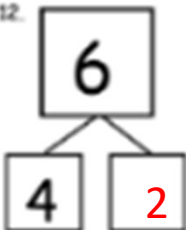
7. 

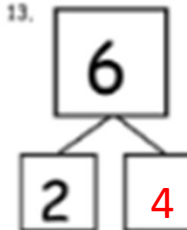
8. 

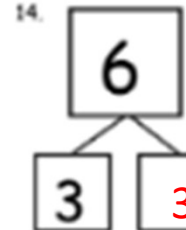
9. 

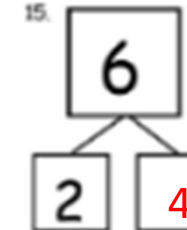
10. 

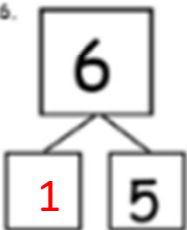
11. 

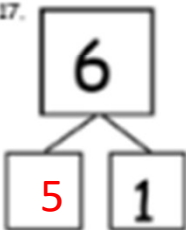
12. 

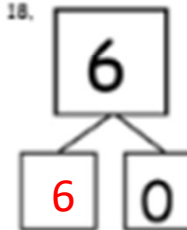
13. 

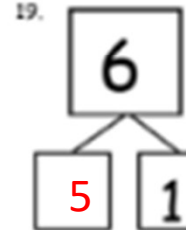
14. 

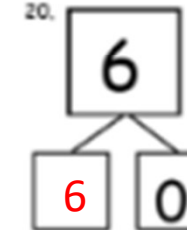
15. 

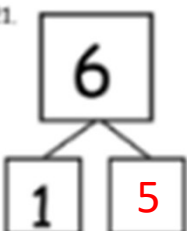
16. 

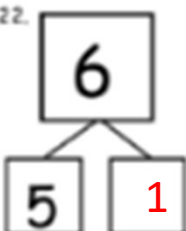
17. 

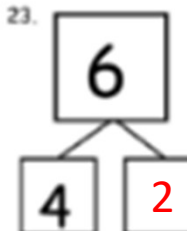
18. 

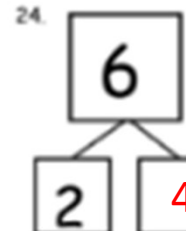
19. 

20. 

21. 

22. 

23. 

24. 

25. 