

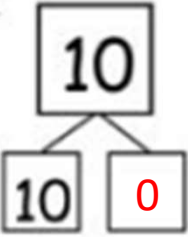
Number Bonds 10

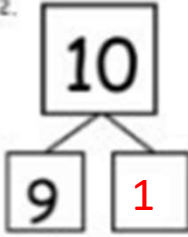
Fill in the missing numbers.

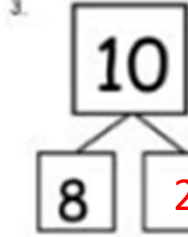
1.		2.		3.		4.		5.	
6.		7.		8.		9.		10.	
11.		12.		13.		14.		15.	
16.		17.		18.		19.		20.	
21.		22.		23.		24.		25.	

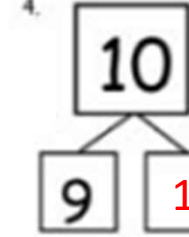
Number Bonds 10

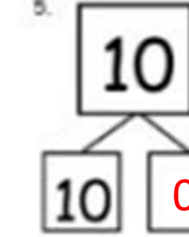
Fill in the missing numbers.

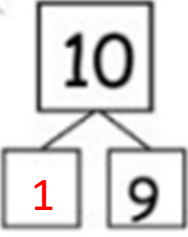
1. 

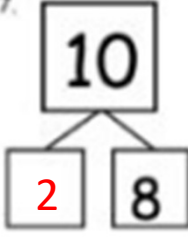
2. 

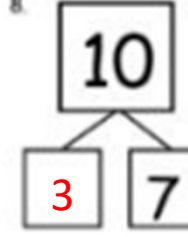
3. 

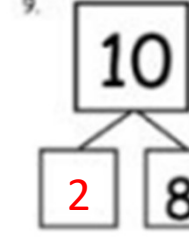
4. 

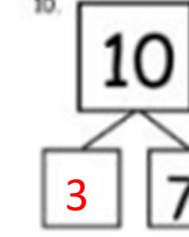
5. 


6. 

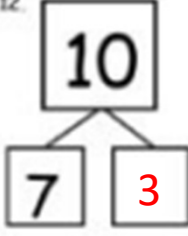
7. 

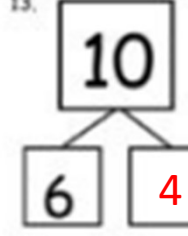
8. 

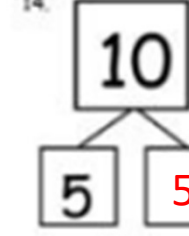
9. 

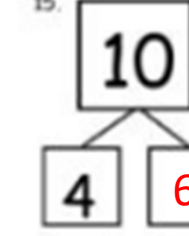
10. 


11. 

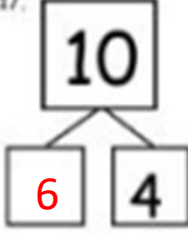
12. 

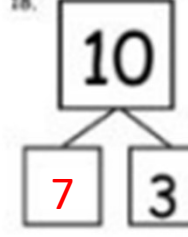
13. 

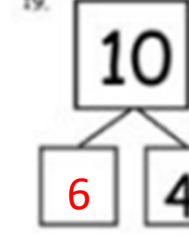
14. 

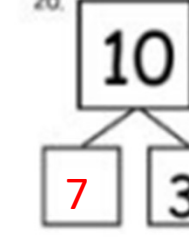
15. 

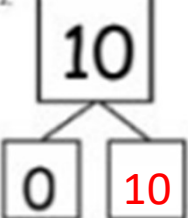
16. 

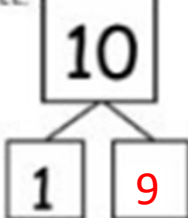
17. 

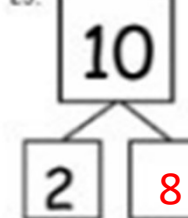
18. 

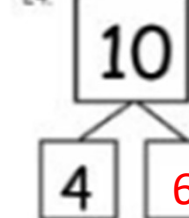
19. 

20. 

21. 

22. 

23. 

24. 

25. 