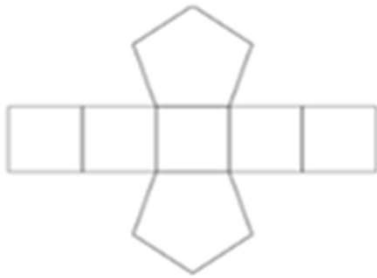


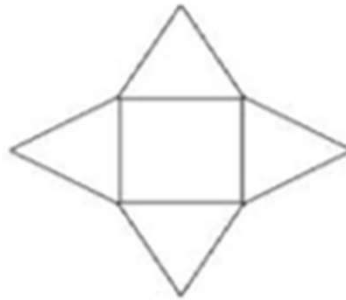
## Geometry Worksheets (Nets of Solids)

Below are the nets for a variety of prisms and pyramids. Classify the solids as prisms or pyramids, and identify the shape of the base(s). Then, write the name of the solid.

a.



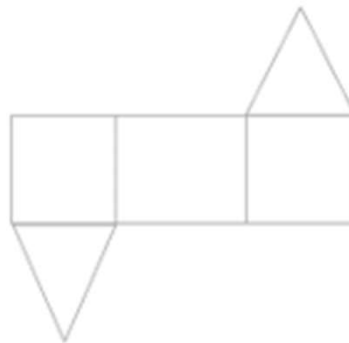
b.



c.



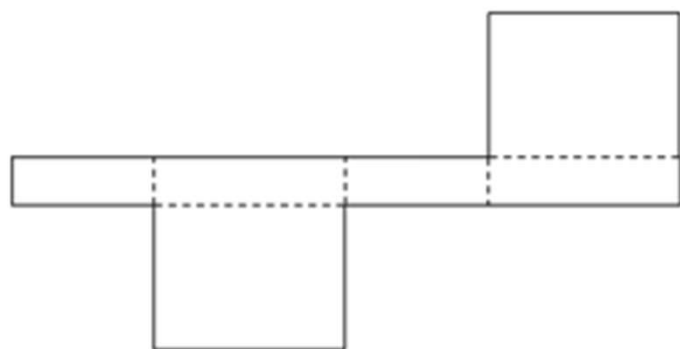
d.



e.



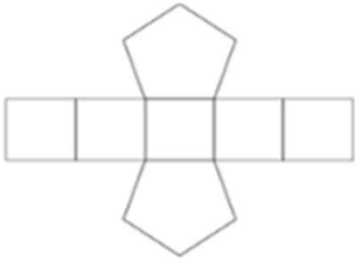
f.



## Geometry Worksheets (Nets of Solids)

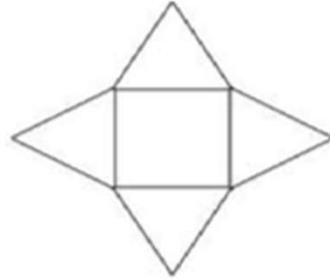
Below are the nets for a variety of prisms and pyramids. Classify the solids as prisms or pyramids, and identify the shape of the base(s). Then, write the name of the solid.

a.



*Prism, the bases are pentagons.  
Pentagonal Prism*

b.



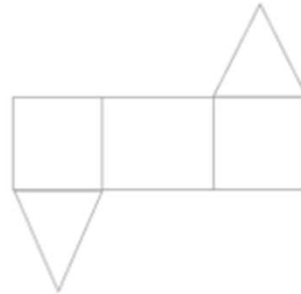
*Pyramid, the base is a rectangle.  
Rectangular Pyramid*

c.



*Pyramid, the base is a triangle.  
Triangular Pyramid*

d.



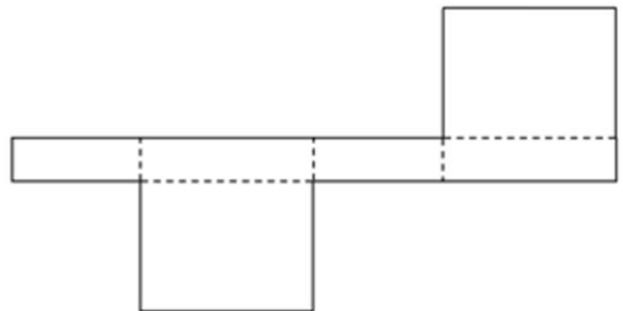
*Prism, the bases are triangles.  
Triangular Prism*

e.



*Pyramid, the base is a hexagon.  
Hexagonal Pyramid*

f.



*Prism, the bases are rectangles.  
Rectangular Prism*