

Coin Worksheets (1st Grade)

Pennies, Nickels, Dimes, Quarters

Name _____

Date _____

1. Match the label to the correct coins, and write the value. There will be more than one match for each coin name.

a.

nickel
_____ cents



b.

dime
_____ cents



c.

quarter
_____ cents



d.

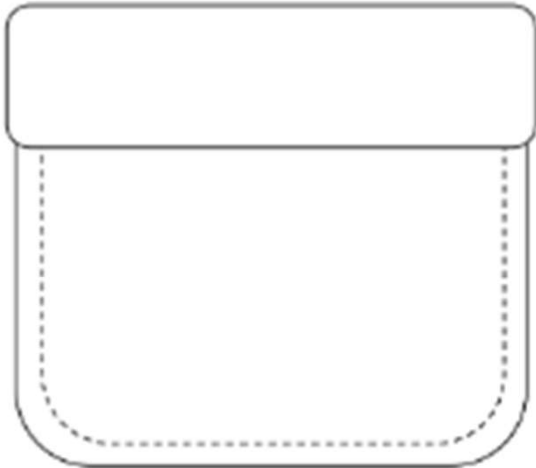
penny
_____ cent



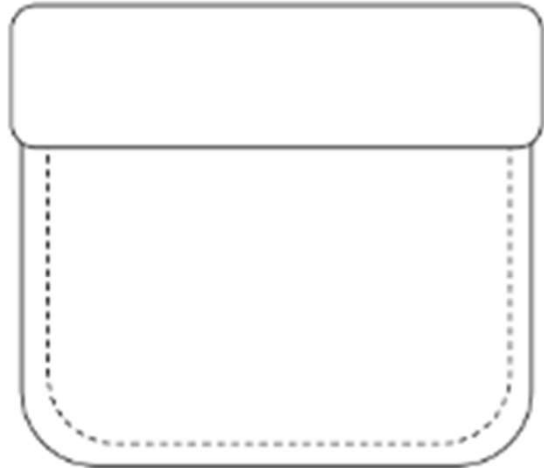
Coin Worksheets (1st Grade) Pennies, Nickels, Dimes, Quarters

2. Lee has one coin in his pocket, and Pedro has 3 coins. Pedro has more money than Lee. Draw a picture to show the coins each boy might have.

Lee's Pocket

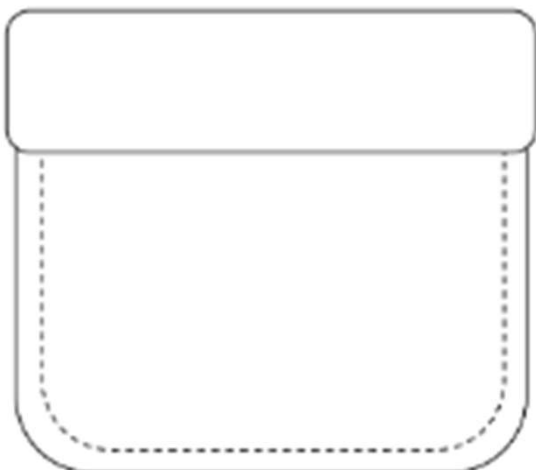


Pedro's Pocket

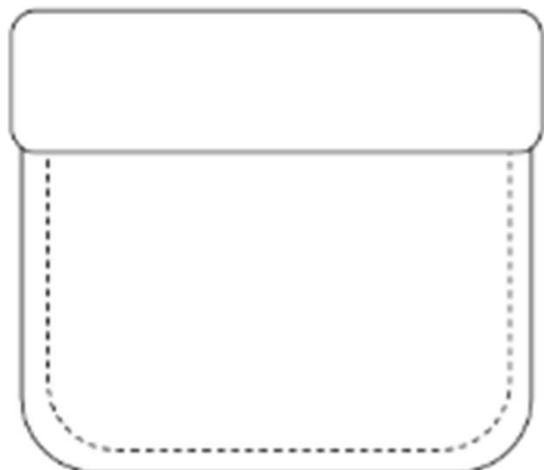


3. Bailey has 4 coins in her pocket, and Ingrid has 4 coins. Ingrid has more money than Bailey. Draw a picture to show the coins each girl might have.

Bailey's Pocket



Ingrid's Pocket



Coin Worksheets (1st Grade)

Pennies, Nickels, Dimes, Quarters

Name _____

Date _____

1. Match the label to the correct coins, and write the value. There will be more than one match for each coin name.

a.

nickel
<u> 5 </u> cents

b.

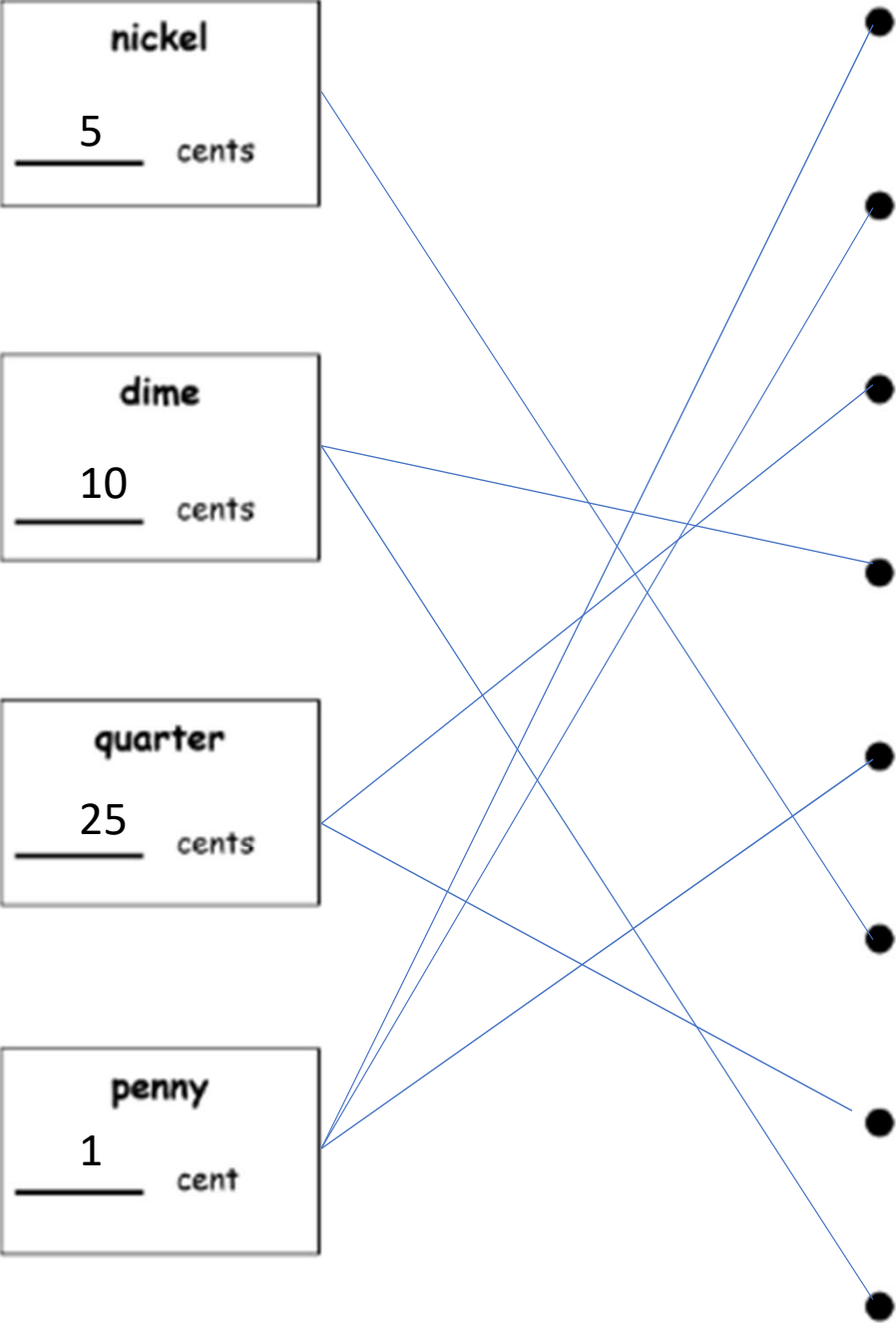
dime
<u> 10 </u> cents

c.

quarter
<u> 25 </u> cents

d.

penny
<u> 1 </u> cent

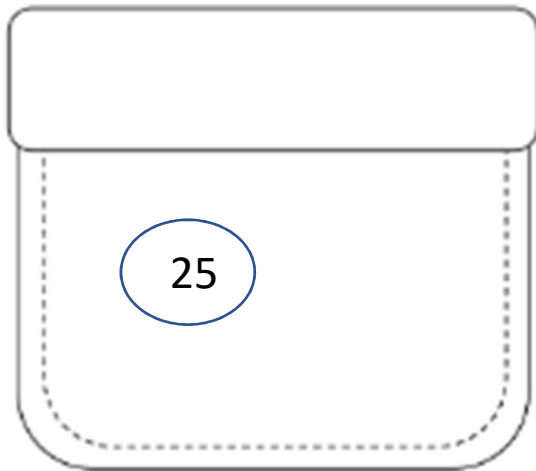


Coin Worksheets (1st Grade)

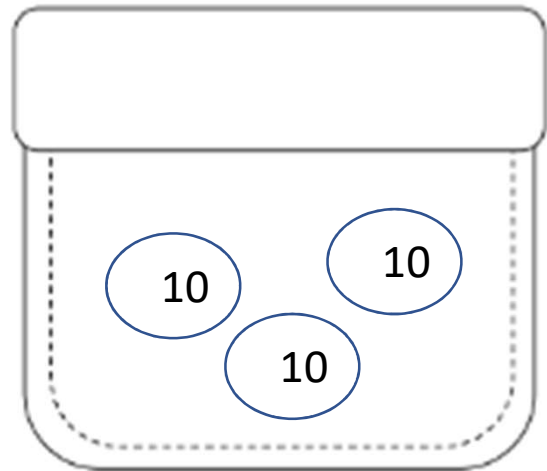
Pennies, Nickels, Dimes, Quarters

2. Lee has one coin in his pocket, and Pedro has 3 coins. Pedro has more money than Lee. Draw a picture to show the coins each boy might have.

Lee's Pocket

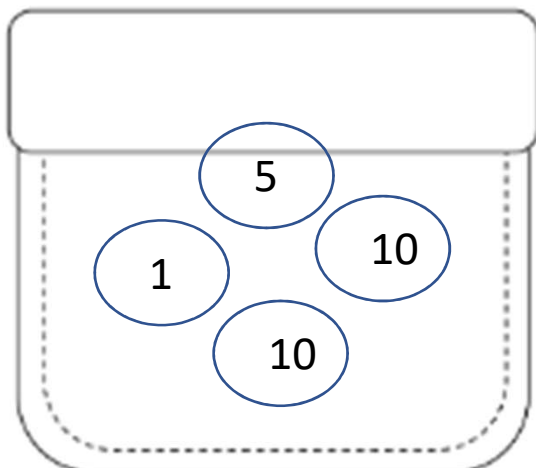


Pedro's Pocket



3. Bailey has 4 coins in her pocket, and Ingrid has 4 coins. Ingrid has more money than Bailey. Draw a picture to show the coins each girl might have.

Bailey's Pocket



Ingrid's Pocket

