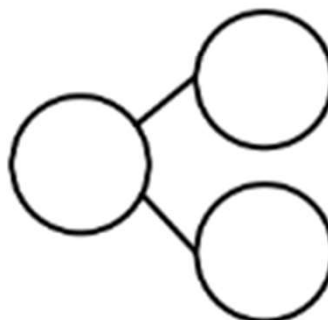

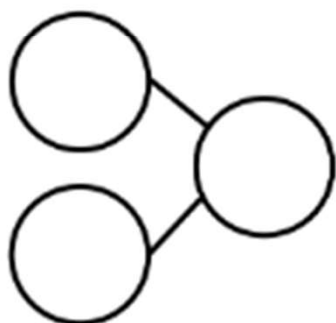

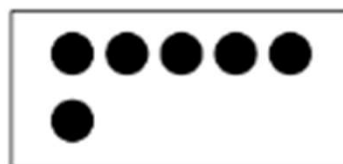
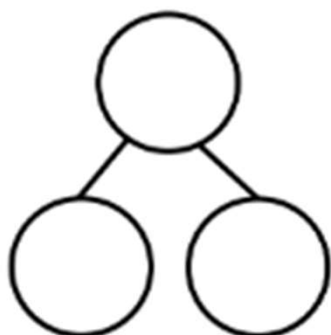
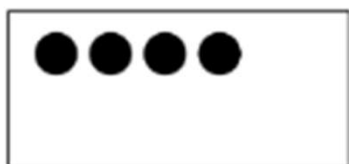


# “Make 10” Worksheets

Name \_\_\_\_\_

Date \_\_\_\_\_

Draw dots to make 10. Fill in the number bond.



Solve.

$9 + 1 = \square$

$5 + 5 = \square$

$7 + 3 = \square$

$10 + 0 = \square$

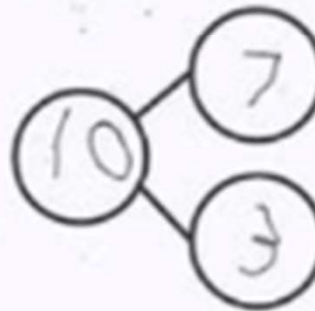
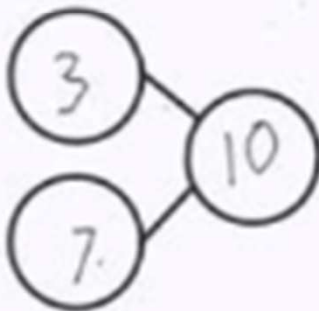
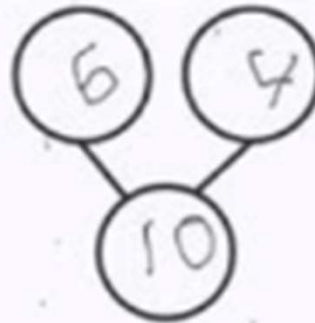

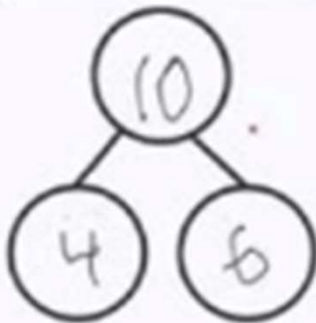

Go to [onlinemathlearning.com](http://onlinemathlearning.com) for more free math resources

# “Make 10” Worksheets

Name \_\_\_\_\_

Date \_\_\_\_\_

Draw dots to make ten. Fill in the number bond.



Solve.

$9 + 1 =$

10

$5 + 5 =$

10

$7 + 3 =$

10

$10 + 0 =$

10