













































# Fraction Worksheets

**A**

# Correct \_\_\_\_\_

Write the fraction that is shaded.













































1		/	23		/
2		/	24		/
3		/	25		/
4		/	26		/
5		/	27		/
6		/	28		/
7		/	29		/
8		/	30		/
9		/	31		/
10		/	32		/
11		/	33		/
12		/	34		/
13		/	35		/
14		/	36		/
15		/	37		/
16		/	38		/
17		/	39		/
18		/	40		/
19		/	41		/
20		/	42		/
21		/	43		/
22		/	44		/

# Fraction Worksheets

**A**

# Correct \_\_\_\_\_

Write the fraction that is shaded.

1		$1/2$	23		$3/4$
2		$1/3$	24		$3/4$
3		$1/4$	25		$3/4$
4		$1/2$	26		$1/2$
5		$1/3$	27		$1/2$
6		$1/4$	28		$1/5$
7		$1/2$	29		$1/5$
8		$1/3$	30		$1/5$
9		$1/4$	31		$2/5$
10		$1/2$	32		$3/5$
11		$1/4$	33		$3/5$
12		$1/3$	34		$4/5$
13		$1/3$	35		$4/5$
14		$1/3$	36		$1/10$
15		$2/3$	37		$2/10$
16		$2/3$	38		$3/10$
17		$2/3$	39		$8/10$
18		$1/4$	40		$5/10$
19		$1/4$	41		$7/10$
20		$1/4$	42		$6/10$
21		$1/4$	43		$4/5$
22		$3/4$	44		$1/5$

Go to [onlinemathlearning.com](http://onlinemathlearning.com) for more free math resources