
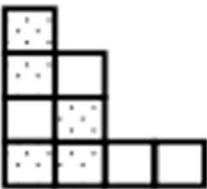












Fraction Worksheets

Fill in the chart.

| | Total Number of Equal Parts | Total Number of Shaded Equal Parts | Unit Fraction | Fraction Shaded |
|----------------------------------------------------------------------------------------------|-----------------------------|------------------------------------|---------------|-----------------|
| Sample:  | 4 | 3 | $\frac{1}{4}$ | $\frac{3}{4}$ |
| a.  | | | | |
| b.  | | | | |
| c.  | | | | |
| d.  | | | | |
| e.  | | | | |

Go to onlinemathlearning.com for more free math resources

Fraction Worksheets

| | Total Number of Equal Parts | Total Number of Shaded Equal Parts | Unit Fraction | Fraction Shaded |
|----------------------------------------------------------------------------------------------|-----------------------------|------------------------------------|---------------|-----------------|
| Sample:  | 4 | 3 | $\frac{1}{4}$ | $\frac{3}{4}$ |
| a)  | 9 | 5 | $\frac{1}{9}$ | $\frac{5}{9}$ |
| b)  | 7 | 3 | $\frac{1}{7}$ | $\frac{3}{7}$ |
| c)  | 5 | 4 | $\frac{1}{5}$ | $\frac{4}{5}$ |
| d)  | 6 | 2 | $\frac{1}{6}$ | $\frac{2}{6}$ |
| e)  | 8 | 8 | $\frac{1}{8}$ | $\frac{8}{8}$ |

Go to onlinemathlearning.com for more free math resources