
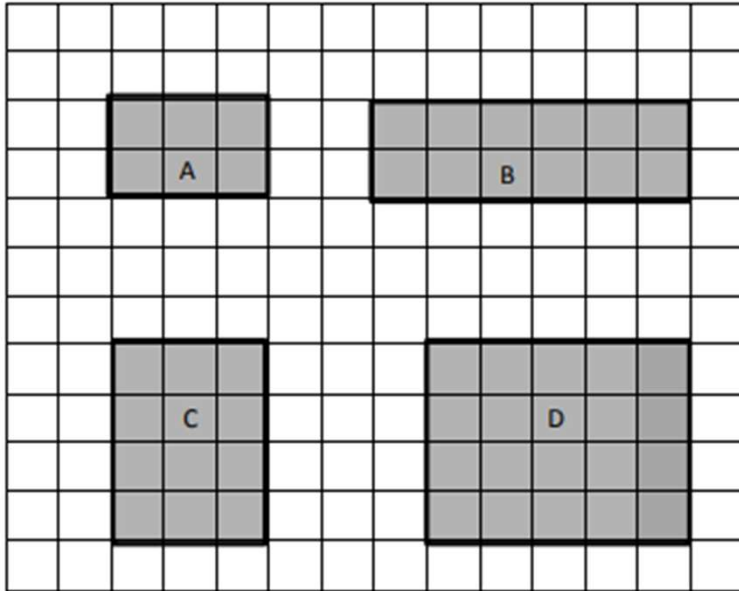


Area Worksheets (Rectangles)

1. Each  is 1 square unit. What is the area of each of the following rectangles?




A: _____ square units

B: _____


C: _____

D: _____

2. Each  is 1 square unit. What is the area of each of the following rectangles?




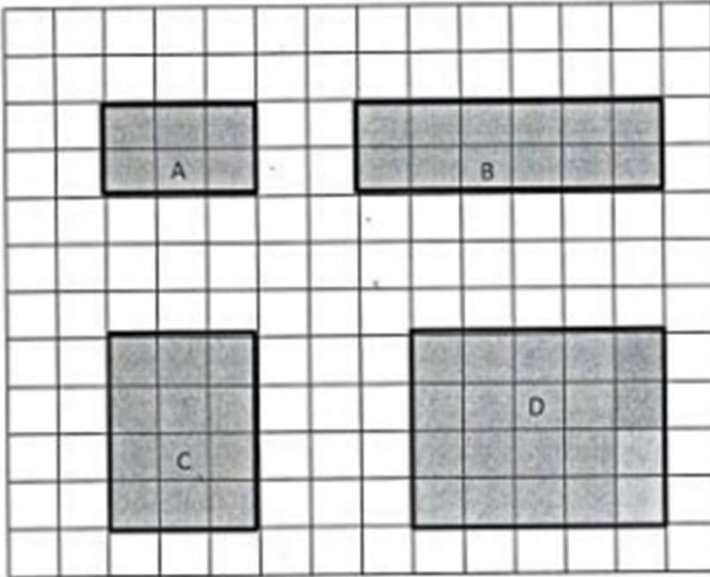






Area Worksheets (Rectangles)

1. Each  is 1 square unit. What is the area of each of the following shapes?





A: 6 square units


B: 12 square units


C: 12 square units


D: 20 square units

2. Each  is 1 square unit. What is the area of each of the following rectangles?

a. 
6 square units

b. 
9 square units

c. 
16 square units

d. 
12 square units