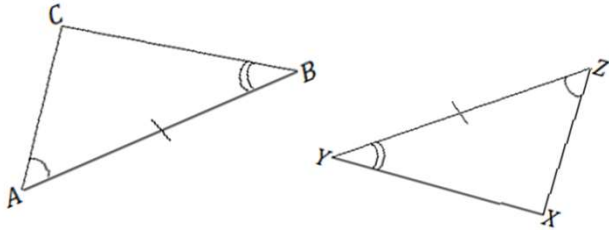


Identify Congruent Triangles Worksheets

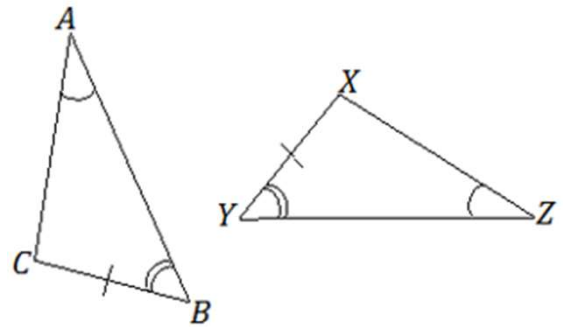
For each pair of triangles, determine if the triangles are congruent, name the triangle congruence and identify the congruence criterion used (SSS, SAS, ASA, AAS, HL).



Congruent: Yes/No

$\triangle ABC \leftrightarrow \triangle$ _____

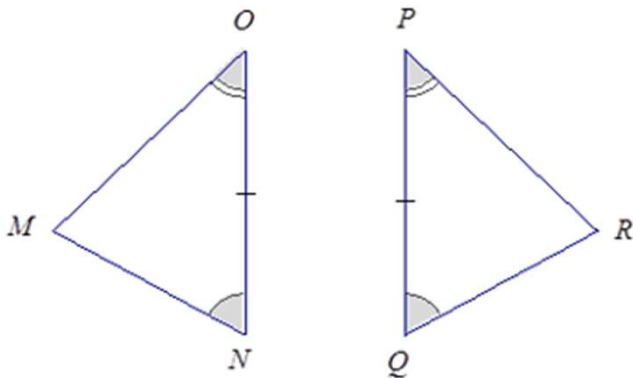
Reason:



Congruent: Yes/No

$\triangle ABC \leftrightarrow \triangle$ _____

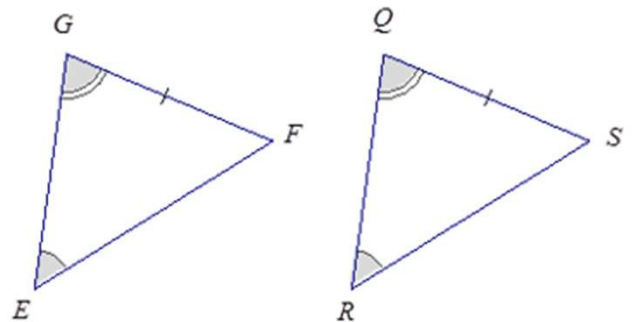
Reason:



Congruent: Yes/No

$\triangle MNO \leftrightarrow \triangle$ _____

Reason:



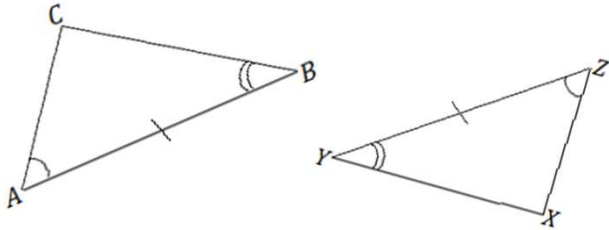
Congruent: Yes/No

$\triangle EGF \leftrightarrow \triangle$ _____

Reason:

Identify Congruent Triangles Worksheets

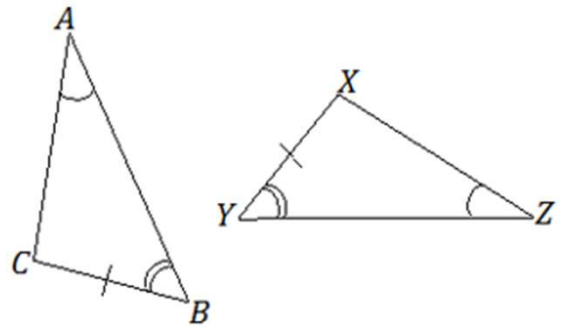
For each pair of triangles, determine if the triangles are congruent, name the triangle congruence and identify the congruence criterion used (SSS, SAS, ASA, AAS, HL).



Congruent: Yes/No

$\triangle ABC \leftrightarrow \triangle ZYX$

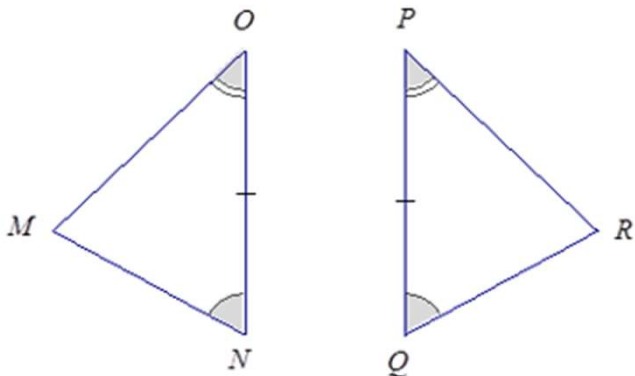
Reason: ASA



Congruent: Yes/No

$\triangle ABC \leftrightarrow \triangle ZYX$

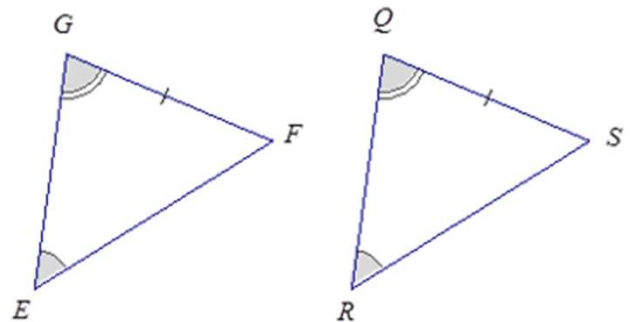
Reason:



Congruent: Yes/No

$\triangle MNO \leftrightarrow \triangle RQP$

Reason: ASA



Congruent: Yes/No

$\triangle EGF \leftrightarrow \triangle RQS$

Reason: AAS