





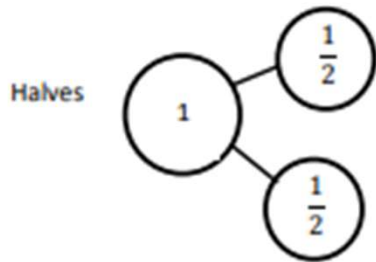
# Fraction Worksheets

## (Fractions on the Number Line)

Name \_\_\_\_\_

Date \_\_\_\_\_

1. Write number bonds. Partition the fraction strip to show the unit fractions of the number bond. Use the fraction strip to help you label the unit fractions on the number line. Include 0 unit fractions.



## Fraction Worksheets (Fractions on the Number Line)

1. Write number bonds. Partition the fraction strip to show the unit fractions of the number bond. Use the fraction strip to help you label the unit fractions on the number line. Include 0 unit fractions.

