

Fraction Worksheets

(Equivalent Fractions & Area Model)

Each rectangle represents 1.

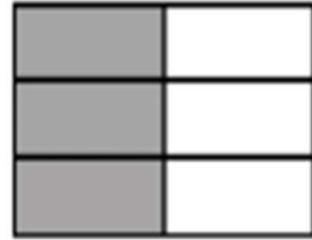
1. Compose the shaded fractions into larger fractional units. Express the equivalent fractions in a number sentence using division. The first one has been done for you.

a.

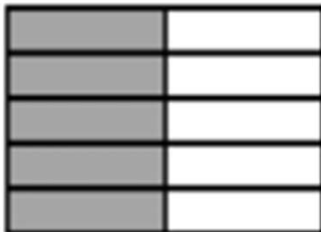


$$\frac{2}{4} = \frac{2 \div 2}{4 \div 2} = \frac{1}{2}$$


b.



c.



d.



Fraction Worksheets (Equivalent Fractions & Area Model)

Each rectangle represents 1.

1. Compose the shaded fractions into larger fractional units. Express the equivalent fractions in a number sentence using division. The first one has been done for you.

