



Fraction Worksheets (Equal Parts)

1. Circle the strips that are cut into equal parts.




2.



a. There are _____ equal parts in all. _____ are shaded.



b. There are _____ equal parts in all. _____ are shaded.




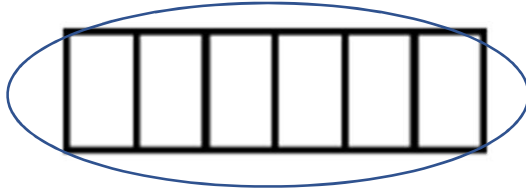
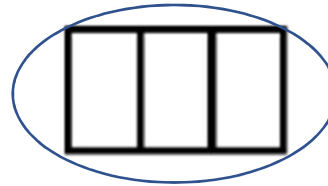
c. There are _____ equal parts in all. _____ are shaded.



d. There are _____ equal parts in all. _____ are shaded.

Fraction Worksheets (Equal Parts)

1. Circle the strips that are cut into equal parts.




2.



a. There are 4 equal parts in all. 1 are shaded.



b. There are 3 equal parts in all. 1 are shaded.



c. There are 4 equal parts in all. 1 are shaded.



d. There are 14 equal parts in all. 7 are shaded.

Go to onlinemathlearning.com for more free math resources