

# Equal Groups Worksheets

Name \_\_\_\_\_

Date \_\_\_\_\_

1. Circle groups of two apples.



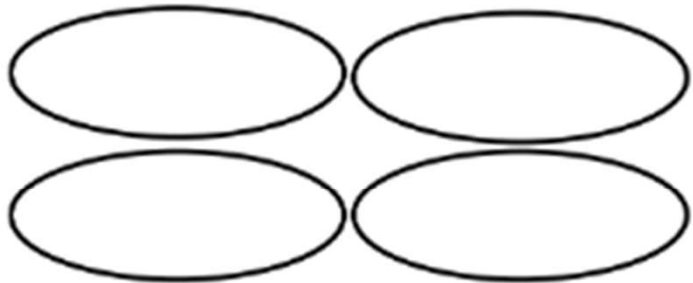
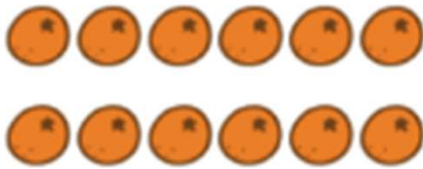
There are \_\_\_\_\_ groups of two apples.

2. Circle groups of three balls.



There are \_\_\_\_\_ groups of three balls.

3. Redraw the 12 oranges into 4 equal groups.



4 groups of \_\_\_\_\_ oranges

4. Redraw the 12 oranges into 3 equal groups.



3 groups of \_\_\_\_\_ oranges

# Equal Groups Worksheets

1. Circle groups of two apples.



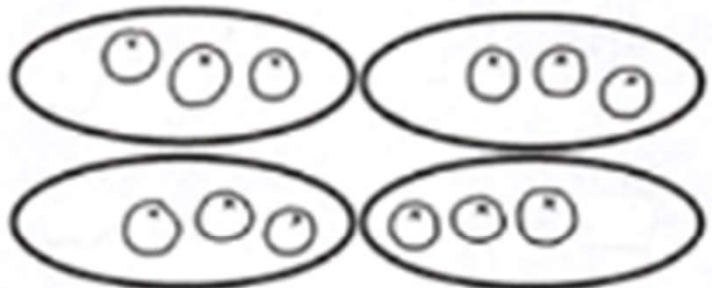
There are 5 groups of two apples.

2. Circle groups of three balls.



There are 5 groups of three balls.

3. Redraw the 12 oranges into 4 equal groups.



4 groups of 3 oranges

4. Redraw the 12 oranges into 3 equal groups.



3 groups of 4 oranges