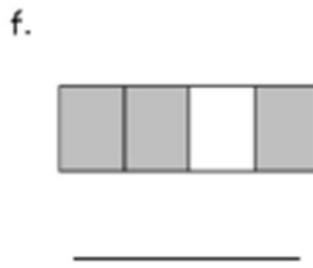
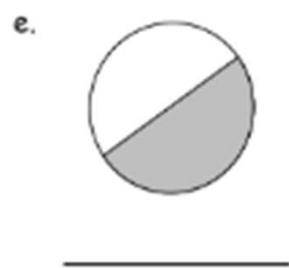
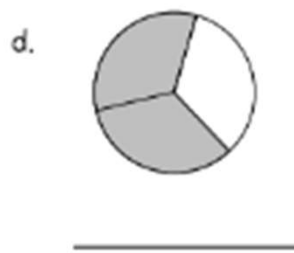
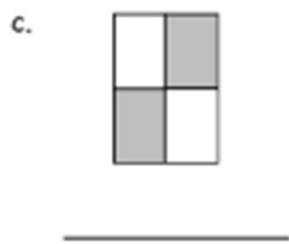
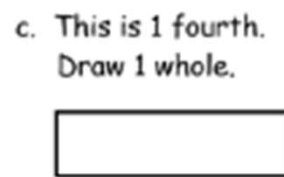
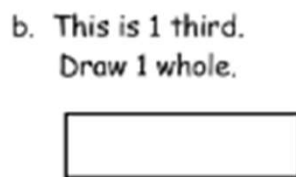
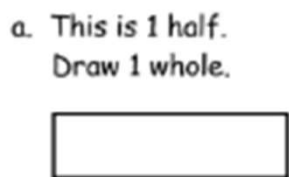


Divide Shapes Worksheets

1. What fraction do you need to color so that 1 whole is shaded?



2. Complete the drawing to show 1 whole.




Divide Shapes Worksheets

1. What fraction do you need to color so that 1 whole is shaded?




2. Complete the drawing to show 1 whole.

a. This is 1 half.
Draw 1 whole.



b. This is 1 third.
Draw 1 whole.



c. This is 1 fourth.
Draw 1 whole.

