

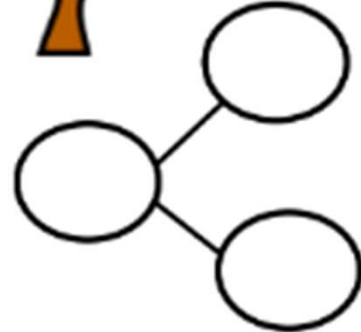
Decompose/Compose 8 Worksheets

Name _____

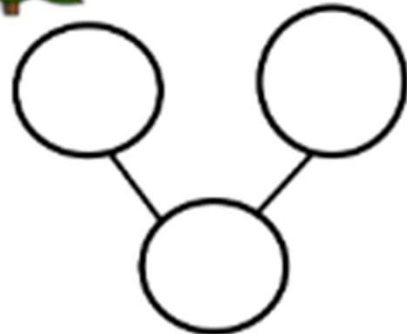
Date _____



There are 8 trees. 5 are palm trees, and 3 are apple trees. Fill in the number sentences and the number bond.


$$\begin{array}{r} \square = \square + \square \\ \square + \square = \square \end{array}$$


There are 8 trees. 4 are oak trees, and 4 are spruce trees. Fill in the number sentences and the number bond.


$$\begin{array}{r} \square = \square + \square \\ \square + \square = \square \end{array}$$



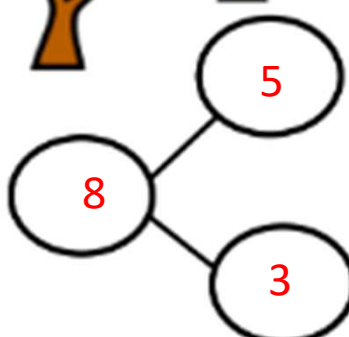
Decompose/Compose 8 Worksheets

Name _____


Date _____



There are 8 trees. 5 are palm trees, and 3 are apple trees. Fill in the number sentences and the number bond.


$$\begin{array}{r} \boxed{8} \\ \boxed{5} \end{array} = \begin{array}{r} \boxed{5} \\ \boxed{3} \end{array} + \begin{array}{r} \boxed{3} \\ \boxed{8} \end{array}$$


There are 8 trees. 4 are oak trees, and 4 are spruce trees. Fill in the number sentences and the number bond.


$$\begin{array}{r} \boxed{8} \\ \boxed{4} \end{array} = \begin{array}{r} \boxed{4} \\ \boxed{4} \end{array} + \begin{array}{r} \boxed{4} \\ \boxed{8} \end{array}$$
