

Decompose/Compose 7 Worksheets

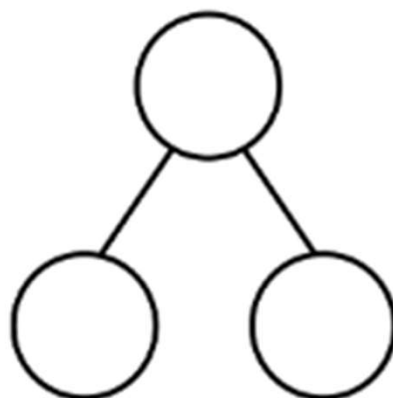
Name _____

Date _____

There are 7 animals. There are 5 giraffes and 2 elephants.



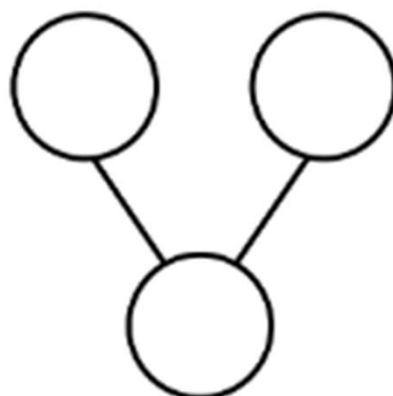
$$= 5 + 2$$



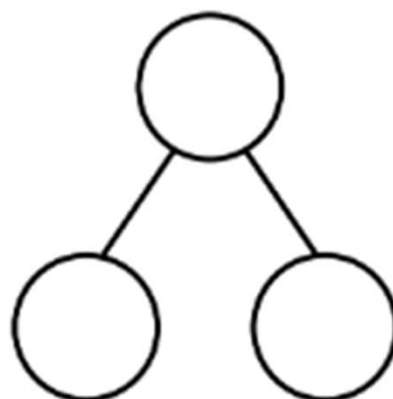
At the store, there was 1 big bear and 6 small bears. There were 7 bears.



$$1 + 6 = \square$$



$$= 2 + 5$$




Decompose/Compose 7 Worksheets

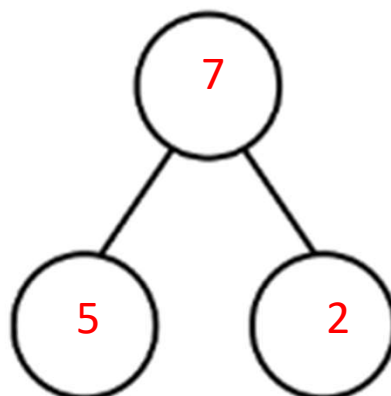
Name _____

Date _____

There are 7 animals. There are 5 giraffes and 2 elephants.



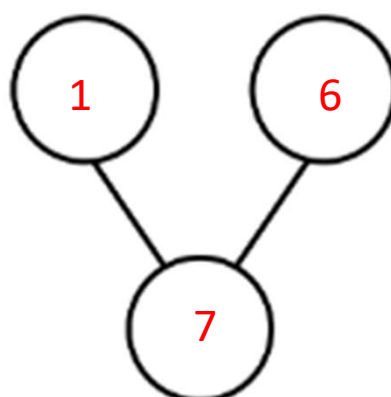
$$7 = 5 + 2$$



At the store, there was 1 big bear and 6 small bears. There were 7 bears.



$$1 + 6 = \boxed{7}$$



$$7 = 2 + 5$$

