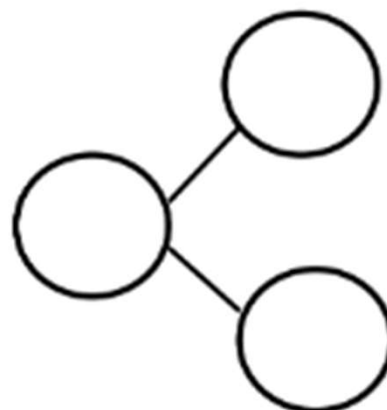


Decompose/Compose 6 Worksheets

Name _____

Date _____

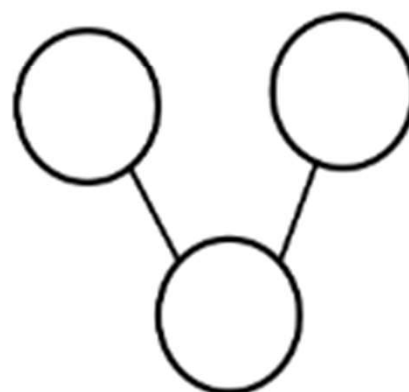
There are 6 animals. 4 are tigers, and 2 are lions.
Fill in the number sentences and the number bond.



is and

= +

There 3 are monkeys and 3 elephants. All 6 animals are going into the circus tent. Fill in the number sentences and the number bond.



and is

+ =

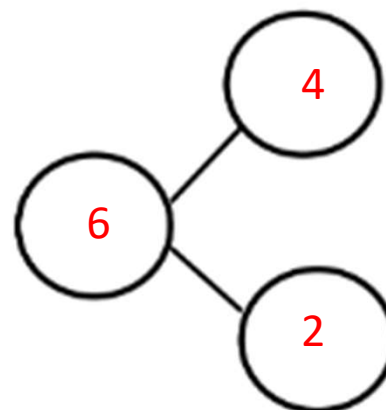
On the back of your paper, draw some animals. Make a number bond to match your picture.

Decompose/Compose 6 Worksheets

Name _____

Date _____

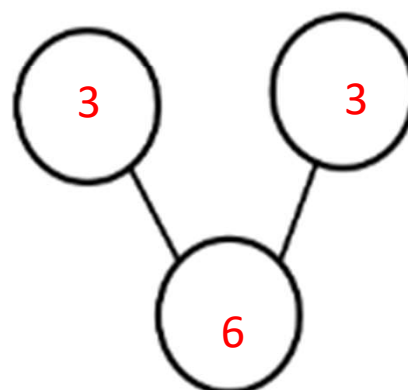
There are 6 animals. 4 are tigers, and 2 are lions.
Fill in the number sentences and the number bond.



$$\boxed{6} \text{ is } \boxed{4} \text{ and } \boxed{2}$$

$$\boxed{6} = \boxed{4} + \boxed{2}$$

There 3 are monkeys and 3 elephants. All 6 animals are going into the circus tent. Fill in the number sentences and the number bond.



$$\boxed{6} \text{ and } \boxed{3} \text{ is } \boxed{3}$$

$$\boxed{3} + \boxed{3} = \boxed{6}$$

On the back of your paper, draw some animals. Make a number bond to match your picture.