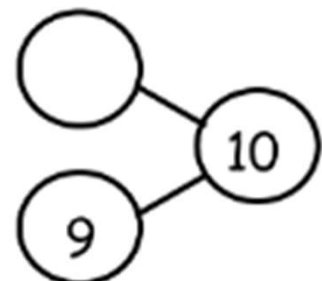
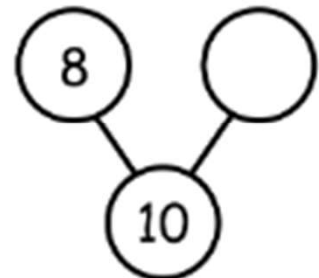

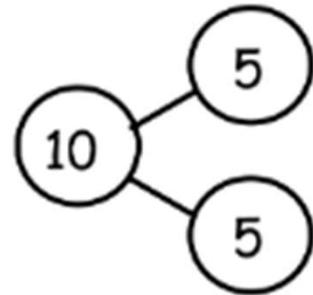
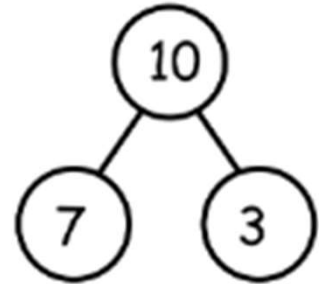


# Decompose/Compose 10 Worksheets

Name \_\_\_\_\_

Date \_\_\_\_\_

These squares represent cube sticks. Look at the linking cube sticks. Draw a line from the cube stick to the number bond that matches. Fill in the number bond if it is not complete.



# Decompose/Compose 10 Worksheets

Name \_\_\_\_\_

Date \_\_\_\_\_

These squares represent cube sticks. Look at the linking cube sticks. Draw a line from the cube stick to the number bond that matches. Fill in the number bond if it is not complete.

