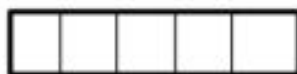
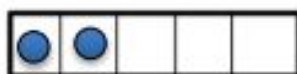




## Counting Objects up to 8

Count how many. Write the number in the box.



Go to [onlinemathlearning.com](https://www.onlinemathlearning.com) for more worksheets