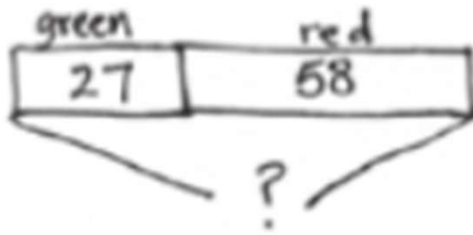


2-digit Addition Worksheet (Word Problems)



1. Samantha brought grapes to school for a snack. She had 27 green grapes and 58 red grapes. How many grapes did she bring to school?



$$\begin{array}{r} 58 \\ + 27 \\ \hline 85 \end{array}$$

Samantha brought 85 grapes to school.

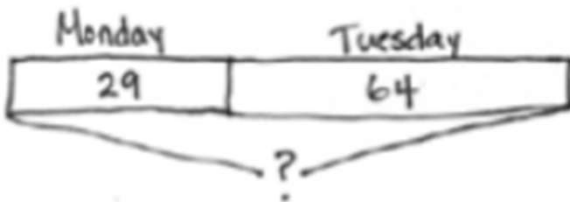
2. Thomas read 29 pages of his new book on Monday. On Tuesday, he read 35 more pages than he did on Monday.
a. How many pages did Thomas read on Tuesday?



$$\begin{array}{r} 29 \\ + 35 \\ \hline 64 \end{array}$$

Thomas read 64 pages on Tuesday.

- a. How many pages did Thomas read on both days?



$$\begin{array}{r} 29 \\ + 64 \\ \hline 93 \end{array}$$

Thomas read 93 pages on Monday and Tuesday.