

## Addition to 7 Worksheets

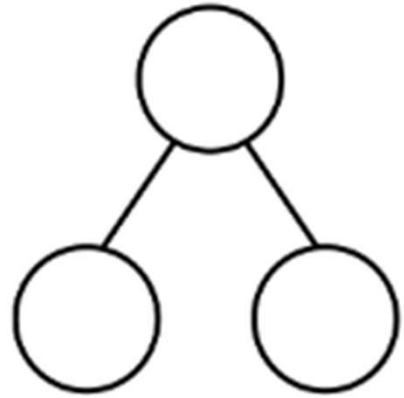
Name \_\_\_\_\_

Date \_\_\_\_\_

There are 7 animals. There are 5 giraffes and 2 elephants.



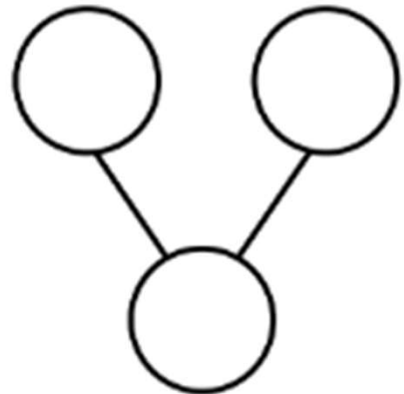
$$= 5 + 2$$



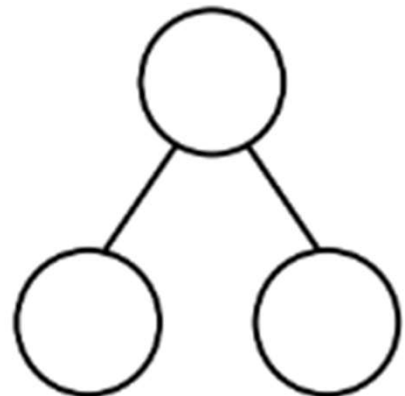
At the store, there was 1 big bear and 6 small bears. There were 7 bears.



$$1 + 6 = \square$$



$$= 2 + 5$$



## Addition to 7 Worksheets

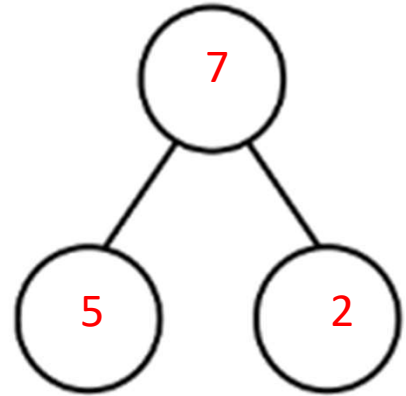
Name \_\_\_\_\_

Date \_\_\_\_\_

There are 7 animals. There are 5 giraffes and 2 elephants.



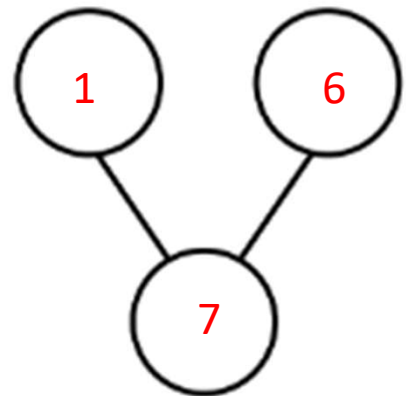
$$7 = 5 + 2$$



At the store, there was 1 big bear and 6 small bears. There were 7 bears.



$$1 + 6 = 7$$



$$7 = 2 + 5$$

