


## Addition to 6 Worksheets

Name \_\_\_\_\_

Date \_\_\_\_\_

Fill in the number sentences.

3 geckos have black spots, and 3 geckos have no spots. There are 6 geckos.




$3 + 3 = \square$

$\square = 3 + 3$

---

There are 6 cars on the road. 2 cars are big, and 4 are small.



$\square$  is  $\square$  and  $\square$

$\square = \square + \square$


## Addition to 6 Worksheets

Name \_\_\_\_\_

Date \_\_\_\_\_

Fill in the number sentences.

3 geckos have black spots, and 3 geckos have no spots. There are 6 geckos.




$3 + 3 = 6$

$6 = 3 + 3$

---

There are 6 cars on the road. 2 cars are big, and 4 are small.



$6$  is  $4$  and  $2$

$6 = 4 + 2$