

Addition/Subtraction Word Problem Worksheets

1. 9 dogs were playing at the park. Some more dogs came to the park. Then, there were 11 dogs. How many more dogs came to the park?

_____ more dogs came to the park.

2. 16 strawberries are in a basket for Peter and Julio. Peter eats 8 of them. How many are there for Julio to eat?

Julio has _____ strawberries to eat.

3. 13 children are on the roller coaster. 3 adults are on the roller coaster. How many people are on the roller coaster?

There are _____ people on the roller coaster.

Addition/Subtraction Word Problem Worksheets

4. 13 people are on the roller coaster now. 3 adults are on the roller coaster, and the rest are children. How many children are on the roller coaster?

There are _____ children on the roller coaster.

5. Ben has 6 baseball practices in the morning this month. If Ben also has 6 practices in the afternoon, how many baseball practices does Ben have?


Ben has _____ baseball practices.

6. Some yellow beads were on Tamra's bracelet. After she put 14 purple beads on the bracelet, there were 18 beads. How many yellow beads did Tamra's bracelet have at first?

Tamra's bracelet had _____ yellow beads.

Addition/Subtraction Word Problem Worksheets

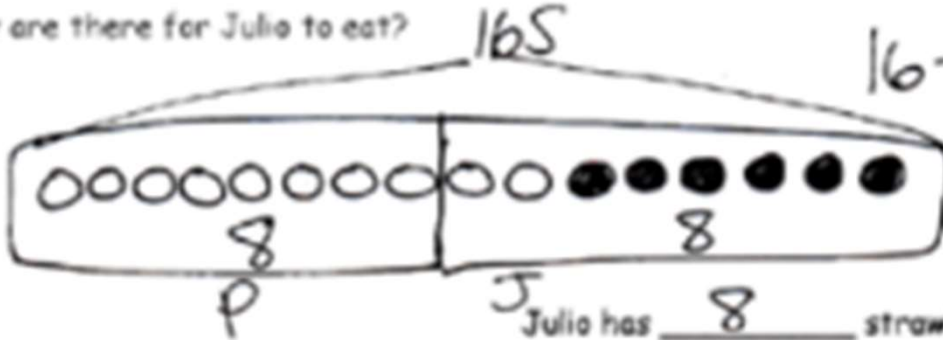
1. 9 dogs were playing at the park. Some more dogs came to the park. Then, there were 11 dogs. How many more dogs came to the park?



$$9 + \boxed{2} = 11$$

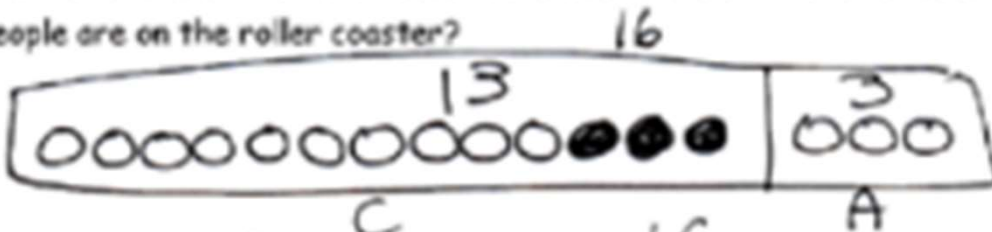
2 more dogs came to the park.

2. 16 strawberries are in a basket for Peter and Julio. Peter eats 8 of them. How many are there for Julio to eat?



Julio has 8 strawberries to eat.

3. 13 children are on the roller coaster. 3 adults are on the roller coaster. How many people are on the roller coaster?

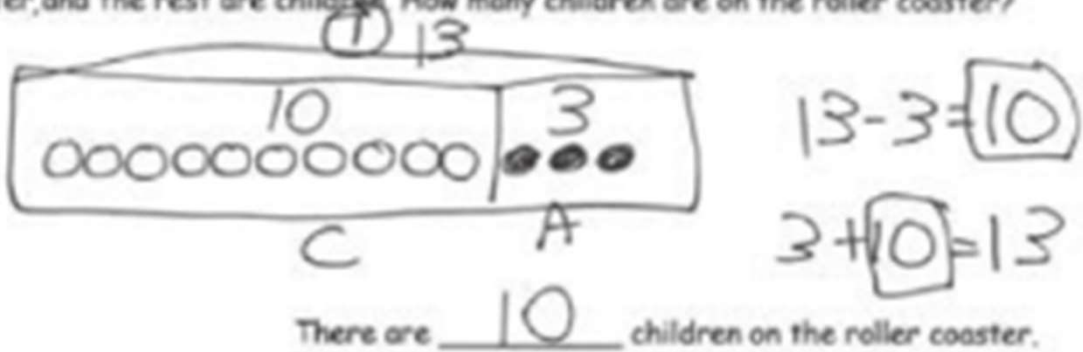


$$13 + 3 = \boxed{16}$$

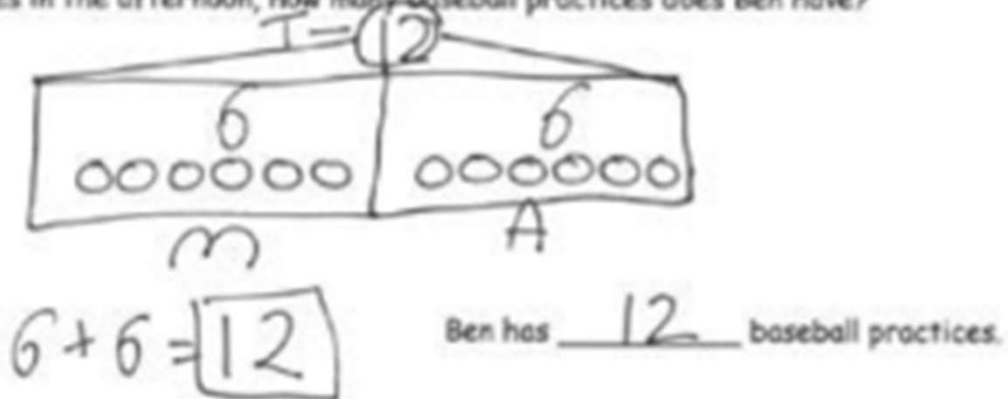
There are 16 people on the roller coaster.

Addition/Subtraction Word Problem Worksheets

4. 13 people are on the roller coaster now. 3 adults are on the roller coaster, and the rest are children. How many children are on the roller coaster?



5. Ben has 6 baseball practices in the morning this month. If Ben also has 6 practices in the afternoon, how many baseball practices does Ben have?



6. Some yellow beads were on Tamra's bracelet. After she put 14 purple beads on the bracelet, there were 18 beads. How many yellow beads did Tamra's bracelet have at first?

