
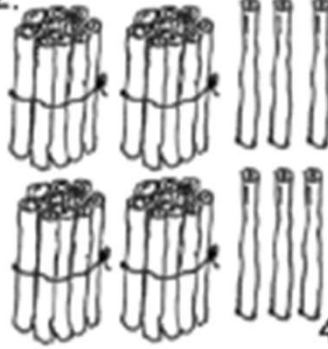






Add Tens and Ones Worksheets

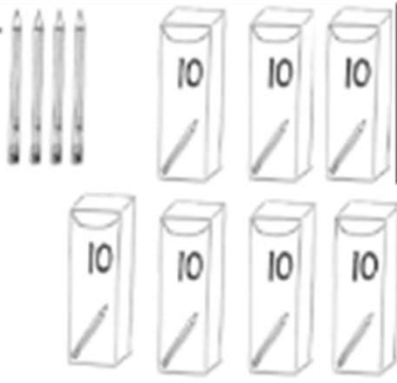
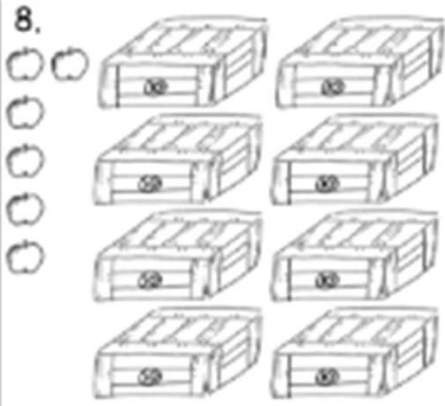
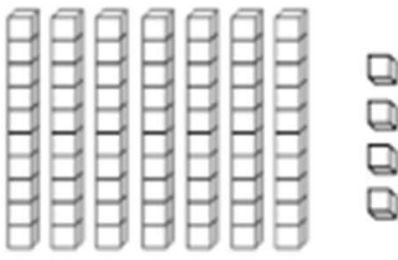

Name _____

Date _____

Count the objects, and fill in the number bond or place value chart. Complete the sentences to add the tens and ones.

<p>1.</p>  <div style="display: flex; align-items: center; justify-content: center; margin-top: 20px;"> <div style="border: 1px solid black; width: 40px; height: 40px; margin-right: 10px;"></div> <div style="border: 1px solid black; width: 40px; height: 40px; margin-right: 10px;"></div> <div style="border: 1px solid black; width: 40px; height: 40px; margin-right: 10px;"></div> </div> <p style="text-align: center;">40 and 3 make ____.</p> <p style="text-align: center;">$40 + 3 = \underline{\quad}$</p>	<p>2.</p>  <div style="display: flex; align-items: center; justify-content: center; margin-top: 20px;"> <div style="border: 1px solid black; width: 40px; height: 40px; margin-right: 10px;"></div> <div style="border: 1px solid black; width: 40px; height: 40px; margin-right: 10px;"></div> <div style="border: 1px solid black; width: 40px; height: 40px; margin-right: 10px;"></div> </div> <p style="text-align: center;">40 and 6 make ____.</p> <p style="text-align: center;">$40 + 6 = \underline{\quad}$</p>
<p>3.</p>  <p style="text-align: center;">$57 = \underline{\quad} + \underline{\quad}$</p> <p style="text-align: center;">7 more than 50 is ____.</p>	<p>4.</p>  <p style="text-align: center;">$75 = \underline{\quad} + \underline{\quad}$</p> <p style="text-align: center;">5 more than 70 is ____.</p>
<p>5.</p>  <div style="display: flex; align-items: center; justify-content: center; margin-top: 20px;"> <div style="border: 1px solid black; width: 40px; height: 40px; margin-right: 10px;"></div> <div style="border: 1px solid black; width: 40px; height: 40px; margin-right: 10px;"></div> <div style="border: 1px solid black; width: 40px; height: 40px; margin-right: 10px;"></div> </div> <p style="text-align: center;">$\underline{\quad} + \underline{\quad} = \underline{\quad}$</p> <p style="text-align: center;">$\underline{\quad}$ tens + $\underline{\quad}$ ones = ____</p>	<p>6.</p>  <div style="display: flex; align-items: center; justify-content: center; margin-top: 20px;"> <div style="border: 1px solid black; width: 40px; height: 40px; margin-right: 10px;"></div> <div style="border: 1px solid black; width: 40px; height: 40px; margin-right: 10px;"></div> <div style="border: 1px solid black; width: 40px; height: 40px; margin-right: 10px;"></div> </div> <p style="text-align: center;">$\underline{\quad} + \underline{\quad} = \underline{\quad}$</p> <p style="text-align: center;">$\underline{\quad}$ tens + $\underline{\quad}$ ones = ____</p>

Add Tens and Ones Worksheets

<p>7. </p> <table border="1" style="float: right; margin-left: 20px;"> <thead> <tr> <th style="padding: 2px;">tens</th> <th style="padding: 2px;">ones</th> </tr> </thead> <tbody> <tr> <td style="height: 40px;"></td> <td style="height: 40px;"></td> </tr> </tbody> </table> <p style="text-align: center; margin-top: 20px;"> $\underline{\quad} + \underline{\quad} = \underline{\quad}$ $\underline{\quad}$ tens + $\underline{\quad}$ ones = $\underline{\quad}$ </p>	tens	ones			<p>8. </p> <table border="1" style="float: right; margin-left: 20px;"> <thead> <tr> <th style="padding: 2px;">tens</th> <th style="padding: 2px;">ones</th> </tr> </thead> <tbody> <tr> <td style="height: 40px;"></td> <td style="height: 40px;"></td> </tr> </tbody> </table> <p style="text-align: center; margin-top: 20px;"> $\underline{\quad} + \underline{\quad} = \underline{\quad}$ $\underline{\quad}$ tens + $\underline{\quad}$ ones = $\underline{\quad}$ </p>	tens	ones		
tens	ones								
tens	ones								
<p>9. </p> <table border="1" style="float: right; margin-left: 20px;"> <thead> <tr> <th style="padding: 2px;">tens</th> <th style="padding: 2px;">ones</th> </tr> </thead> <tbody> <tr> <td style="height: 40px;"></td> <td style="height: 40px;"></td> </tr> </tbody> </table> <p style="text-align: center; margin-top: 20px;"> $\underline{\quad} + \underline{\quad} = \underline{\quad}$ $\underline{\quad}$ tens + $\underline{\quad}$ ones = $\underline{\quad}$ </p>	tens	ones			<p>10. </p> <table border="1" style="float: right; margin-left: 20px;"> <thead> <tr> <th style="padding: 2px;">tens</th> <th style="padding: 2px;">ones</th> </tr> </thead> <tbody> <tr> <td style="height: 40px;"></td> <td style="text-align: center; vertical-align: middle;">0</td> </tr> </tbody> </table> <p style="text-align: center; margin-top: 20px;"> $\underline{\quad} + \underline{\quad} = \underline{\quad}$ $\underline{\quad}$ tens + $\underline{\quad}$ ones = $\underline{\quad}$ </p>	tens	ones		0
tens	ones								
tens	ones								
	0								

11. Complete the sentences to add the tens and ones.

a. $50 + 6 = \underline{\quad}$







b. $\underline{\quad} + 9 = 89$

c. $5 \text{ tens} + \underline{\quad} \text{ ones} = 56$

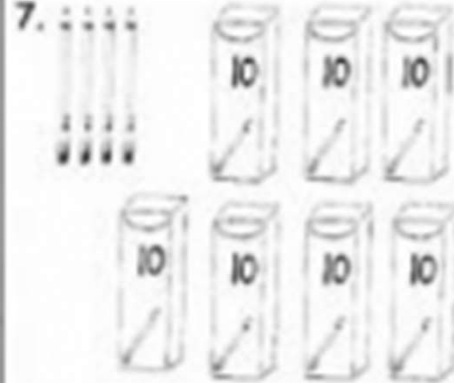

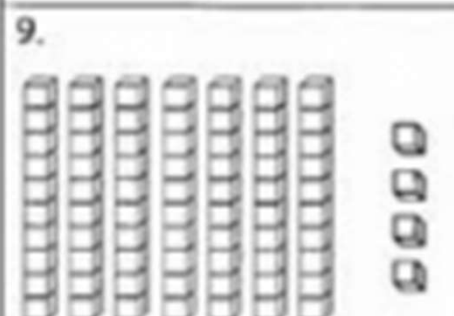
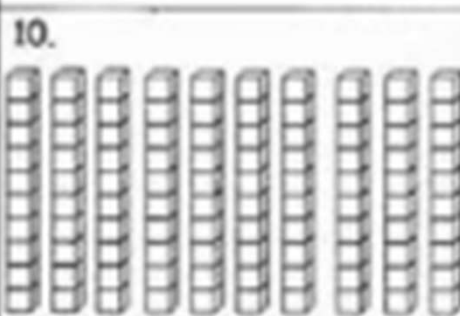
d. $9 \text{ ones} + 8 \text{ tens} = \underline{\quad}$

Add Tens and Ones Worksheets

Count the objects and fill in the number bond or place value chart. Complete the sentences to add the tens and ones.

<p>1.</p>  <div style="display: flex; align-items: center; margin-top: 10px;"> <div style="border: 1px solid black; padding: 5px; margin-right: 10px;">40</div> <div style="border: 1px solid black; padding: 5px; margin-right: 10px;">3</div> <div style="font-size: 2em;">}</div> <div style="border: 1px solid black; padding: 5px; margin-left: 10px;">43</div> </div> <p style="text-align: center; margin-top: 10px;">40 and 3 make <u>43</u></p> <p style="text-align: center;">40 + 3 = <u>43</u></p>	<p>2.</p>  <div style="display: flex; align-items: center; margin-top: 10px;"> <div style="border: 1px solid black; padding: 5px; margin-right: 10px;">40</div> <div style="border: 1px solid black; padding: 5px; margin-right: 10px;">6</div> <div style="font-size: 2em;">}</div> <div style="border: 1px solid black; padding: 5px; margin-left: 10px;">46</div> </div> <p style="text-align: center; margin-top: 10px;">40 and 6 make <u>46</u></p> <p style="text-align: center;">40 + 6 = <u>46</u></p>
<p>3.</p>  <div style="display: flex; align-items: center; margin-top: 10px;"> <div style="border: 1px solid black; padding: 5px; margin-right: 10px;">50</div> <div style="border: 1px solid black; padding: 5px; margin-right: 10px;">7</div> <div style="font-size: 2em;">}</div> <div style="border: 1px solid black; padding: 5px; margin-left: 10px;">57</div> </div> <p style="text-align: center; margin-top: 10px;">7 more than 50 is <u>57</u></p> <p style="text-align: center;">57 = <u>50</u> + <u>7</u></p>	<p>4.</p>  <div style="display: flex; align-items: center; margin-top: 10px;"> <div style="border: 1px solid black; padding: 5px; margin-right: 10px;">70</div> <div style="border: 1px solid black; padding: 5px; margin-right: 10px;">5</div> <div style="font-size: 2em;">}</div> <div style="border: 1px solid black; padding: 5px; margin-left: 10px;">75</div> </div> <p style="text-align: center; margin-top: 10px;">5 more than 70 is <u>75</u></p> <p style="text-align: center;">75 = <u>70</u> + <u>5</u></p>
<p>5.</p>  <div style="display: flex; align-items: center; margin-top: 10px;"> <div style="border: 1px solid black; padding: 5px; margin-right: 10px;">60</div> <div style="border: 1px solid black; padding: 5px; margin-right: 10px;">8</div> <div style="font-size: 2em;">}</div> <div style="border: 1px solid black; padding: 5px; margin-left: 10px;">68</div> </div> <p style="text-align: center; margin-top: 10px;">6 tens + 8 ones = <u>68</u></p> <p style="text-align: center;">60 + 8 = <u>68</u></p>	<p>6.</p>  <div style="display: flex; align-items: center; margin-top: 10px;"> <div style="border: 1px solid black; padding: 5px; margin-right: 10px;">90</div> <div style="border: 1px solid black; padding: 5px; margin-right: 10px;">2</div> <div style="font-size: 2em;">}</div> <div style="border: 1px solid black; padding: 5px; margin-left: 10px;">92</div> </div> <p style="text-align: center; margin-top: 10px;">9 tens + 2 ones = <u>92</u></p> <p style="text-align: center;">90 + 2 = <u>92</u></p>

Add Tens and Ones Worksheets

<p>7.</p>  <table border="1" style="float: right; margin-left: 10px;"> <thead> <tr> <th>tens</th> <th>ones</th> </tr> </thead> <tbody> <tr> <td style="text-align: center;">7</td> <td style="text-align: center;">4</td> </tr> </tbody> </table> <p style="text-align: center; margin-top: 10px;">$74 = 70 + 4$</p> <p><u>4</u> ones + <u>7</u> tens = <u>74</u></p>	tens	ones	7	4	<p>8.</p>  <table border="1" style="float: right; margin-left: 10px;"> <thead> <tr> <th>tens</th> <th>ones</th> </tr> </thead> <tbody> <tr> <td style="text-align: center;">8</td> <td style="text-align: center;">6</td> </tr> </tbody> </table> <p style="text-align: center; margin-top: 10px;">$86 = 80 + 6$</p> <p><u>6</u> ones + <u>8</u> tens = <u>86</u></p>	tens	ones	8	6
tens	ones								
7	4								
tens	ones								
8	6								
<p>9.</p>  <table border="1" style="float: right; margin-left: 10px;"> <thead> <tr> <th>tens</th> <th>ones</th> </tr> </thead> <tbody> <tr> <td style="text-align: center;">7</td> <td style="text-align: center;">4</td> </tr> </tbody> </table> <p style="text-align: center; margin-top: 10px;">$70 + 4 = 74$</p> <p><u>7</u> tens + <u>4</u> ones = <u>74</u></p>	tens	ones	7	4	<p>10.</p>  <table border="1" style="float: right; margin-left: 10px;"> <thead> <tr> <th>tens</th> <th>ones</th> </tr> </thead> <tbody> <tr> <td style="text-align: center;">10</td> <td style="text-align: center;">0</td> </tr> </tbody> </table> <p style="text-align: center; margin-top: 10px;">$100 + 0 = 100$</p> <p><u>10</u> tens + <u>0</u> ones = <u>100</u></p>	tens	ones	10	0
tens	ones								
7	4								
tens	ones								
10	0								

11. Complete the sentences to add the tens and ones.

a. $50 + 6 = \underline{56}$

b. $\underline{80} + 9 = 89$

c. 5 tens + 6 ones = 56

d. 9 ones + 8 tens = 89