
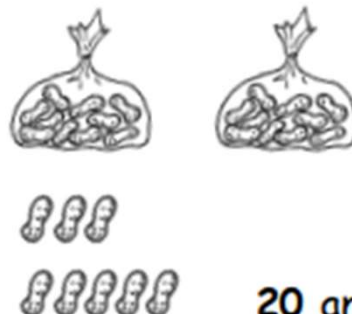







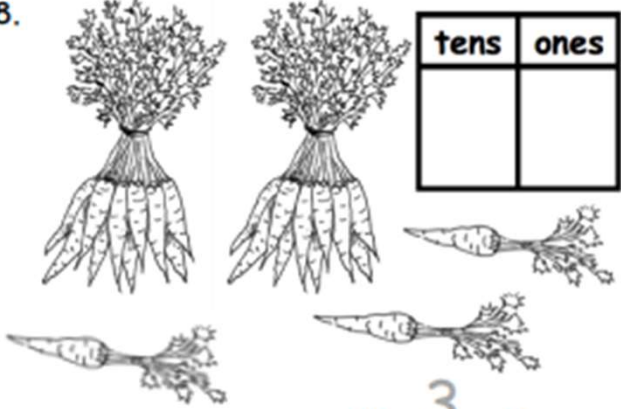
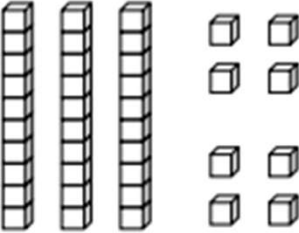
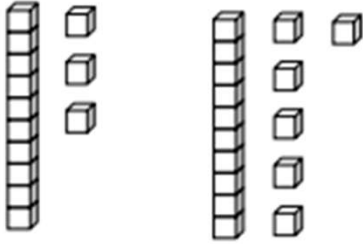
## Add Tens and Ones Worksheets

Fill in the number bond. Complete the sentences.

<p>1.</p> <div style="display: flex; align-items: center; justify-content: space-around;">  <div style="text-align: center;"> <div style="border: 1px solid black; padding: 5px; margin-bottom: 10px;">20</div> <div style="border: 1px solid black; padding: 5px; margin-bottom: 10px;">3</div> <div style="border: 1px solid black; width: 40px; height: 40px; margin: 0 auto;"></div> </div> </div> <p style="text-align: center;">20 and 3 make ____.</p> <p style="text-align: center;"><math>20 + 3 = \underline{\quad}</math></p>	<p>2.</p> <div style="display: flex; align-items: center; justify-content: space-around;">  <div style="text-align: center;"> <div style="border: 1px solid black; width: 40px; height: 40px; margin-bottom: 10px;"></div> <div style="border: 1px solid black; width: 40px; height: 40px; margin: 0 auto;"></div> <div style="border: 1px solid black; width: 40px; height: 40px;"></div> </div> </div> <p style="text-align: center;">20 and 8 make ____.</p> <p style="text-align: center;"><math>20 + 8 = \underline{\quad}</math></p>
<p>3.</p> <div style="display: flex; align-items: center; justify-content: space-around;">  <div style="text-align: center;"> <div style="border: 1px solid black; width: 40px; height: 40px; margin-bottom: 10px;"></div> <div style="border: 1px solid black; width: 40px; height: 40px; margin: 0 auto;"></div> <div style="border: 1px solid black; width: 40px; height: 40px;"></div> </div> </div> <p style="text-align: center;"><math>20 + 7 = \underline{\quad}</math></p> <p style="text-align: center;">7 more than 20 is ____.</p>	<p>4.</p> <div style="display: flex; align-items: center; justify-content: space-around;">  <div style="text-align: center;"> <div style="border: 1px solid black; width: 40px; height: 40px; margin-bottom: 10px;"></div> <div style="border: 1px solid black; width: 40px; height: 40px; margin: 0 auto;"></div> <div style="border: 1px solid black; width: 40px; height: 40px;"></div> </div> </div> <p style="text-align: center;"><math>30 + 6 = \underline{\quad}</math></p> <p style="text-align: center;">6 more than 30 is ____.</p>
<p>5.</p> <div style="display: flex; align-items: center; justify-content: space-around;">  <div style="text-align: center;"> <div style="border: 1px solid black; width: 40px; height: 40px; margin-bottom: 10px;"></div> <div style="border: 1px solid black; width: 40px; height: 40px; margin: 0 auto;"></div> <div style="border: 1px solid black; width: 40px; height: 40px;"></div> </div> </div> <p style="text-align: center;"><math>5 + 20 = \underline{\quad}</math></p> <p style="text-align: center;">20 more than 5 is ____.</p>	<p>6.</p> <div style="display: flex; align-items: center; justify-content: space-around;">  <div style="text-align: center;"> <div style="border: 1px solid black; width: 40px; height: 40px; margin-bottom: 10px;"></div> <div style="border: 1px solid black; width: 40px; height: 40px; margin: 0 auto;"></div> <div style="border: 1px solid black; width: 40px; height: 40px;"></div> </div> </div> <p style="text-align: center;"><math>8 + 30 = \underline{\quad}</math></p> <p style="text-align: center;">30 more than 8 is ____.</p>

## Add Tens and Ones Worksheets

Write the tens and ones. Then write an addition sentence to add the tens and ones.

<p>7.</p>  <table border="1" style="margin-left: auto; margin-right: auto; text-align: center;"> <thead> <tr> <th style="padding: 5px;">tens</th> <th style="padding: 5px;">ones</th> </tr> </thead> <tbody> <tr> <td style="font-size: 2em;">1</td> <td style="font-size: 2em;">4</td> </tr> </tbody> </table> <p style="text-align: center; margin-top: 20px;"><u>10</u> + <u>4</u> = <u>    </u></p>	tens	ones	1	4	<p>8.</p>  <table border="1" style="margin-left: auto; margin-right: auto; text-align: center;"> <thead> <tr> <th style="padding: 5px;">tens</th> <th style="padding: 5px;">ones</th> </tr> </thead> <tbody> <tr> <td style="height: 40px;"></td> <td style="height: 40px;"></td> </tr> </tbody> </table> <p style="text-align: center; margin-top: 20px;"><u>    </u> + <u>3</u> = <u>    </u></p>	tens	ones		
tens	ones								
1	4								
tens	ones								
<p>9.</p>  <table border="1" style="margin-left: auto; margin-right: auto; text-align: center;"> <thead> <tr> <th style="padding: 5px;">tens</th> <th style="padding: 5px;">ones</th> </tr> </thead> <tbody> <tr> <td style="height: 40px;"></td> <td style="height: 40px;"></td> </tr> </tbody> </table> <p style="text-align: center; margin-top: 20px;"><u>    </u> = <u>30</u> + <u>    </u></p>	tens	ones			<p>10.</p>  <table border="1" style="margin-left: auto; margin-right: auto; text-align: center;"> <thead> <tr> <th style="padding: 5px;">tens</th> <th style="padding: 5px;">ones</th> </tr> </thead> <tbody> <tr> <td style="height: 40px;"></td> <td style="height: 40px;"></td> </tr> </tbody> </table> <p style="text-align: center; margin-top: 20px;"><u>    </u> = <u>20</u> + <u>    </u></p>	tens	ones		
tens	ones								
tens	ones								


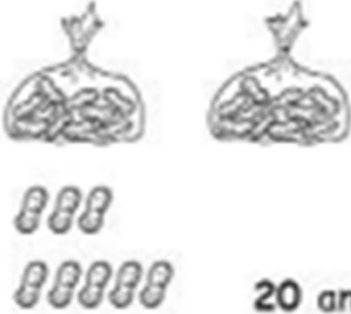


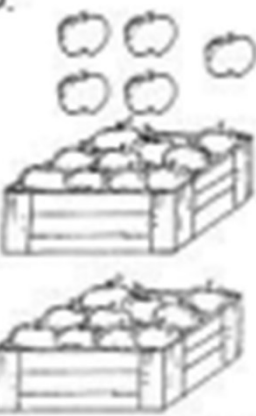

Match.

- |                      |          |
|----------------------|----------|
| 11. 4 tens •         | • 20 + 7 |
| 12. 2 tens 7 ones •  | • 40     |
| 13. 3 more than 20 • | • 20 + 3 |
| 14. 9 ones 3 tens •  | • 30 + 2 |
| 15. 2 ones 3 tens •  | • 9 + 30 |

Go to [onlinemathlearning.com](http://onlinemathlearning.com) for more free math resources


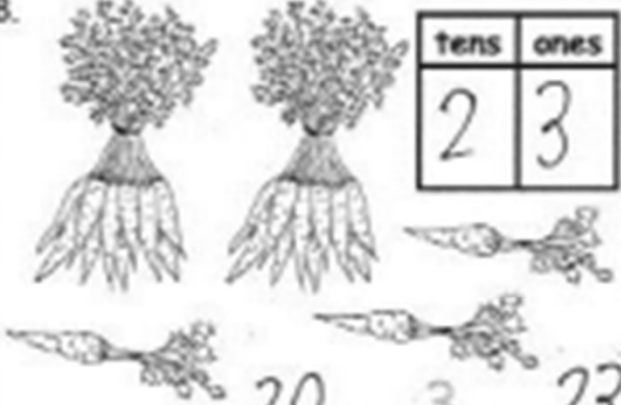
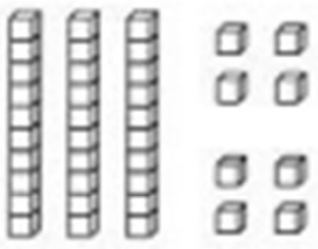

## Add Tens and Ones Worksheets

Fill in the number bond. Complete the sentences.

<p>1.</p>  <p><math>\begin{array}{l} \boxed{20} \\ \boxed{3} \end{array} \rightarrow \boxed{23}</math></p> <p>20 and 3 make <u>23</u>.</p> <p><math>20 + 3 = \underline{23}</math></p>	<p>2.</p>  <p><math>\begin{array}{l} \boxed{20} \\ \boxed{8} \end{array} \rightarrow \boxed{28}</math></p> <p>20 and 8 make <u>28</u>.</p> <p><math>20 + 8 = \underline{28}</math></p>
<p>3.</p>  <p><math>\begin{array}{l} \boxed{20} \\ \boxed{7} \end{array} \rightarrow \boxed{27}</math></p> <p>20 + 7 = <u>27</u></p> <p>7 more than 20 is <u>27</u>.</p>	<p>4.</p>  <p><math>\begin{array}{l} \boxed{30} \\ \boxed{6} \end{array} \rightarrow \boxed{36}</math></p> <p>30 + 6 = <u>36</u></p> <p>6 more than 30 is <u>36</u>.</p>
<p>5.</p>  <p><math>\begin{array}{l} \boxed{20} \\ \boxed{5} \end{array} \rightarrow \boxed{25}</math></p> <p>5 + 20 = <u>25</u></p> <p>20 more than 5 is <u>25</u>.</p>	<p>6.</p>  <p><math>\begin{array}{l} \boxed{30} \\ \boxed{8} \end{array} \rightarrow \boxed{38}</math></p> <p>8 + 30 = <u>38</u></p> <p>30 more than 8 is <u>38</u>.</p>

## Add Tens and Ones Worksheets

Write the tens and ones. Then write an addition sentence to add the tens and ones.

<p>7.</p>  <table border="1" style="margin-left: auto; margin-right: auto;"> <thead> <tr> <th style="padding: 2px;">tens</th> <th style="padding: 2px;">ones</th> </tr> </thead> <tbody> <tr> <td style="text-align: center; font-size: 2em;">1</td> <td style="text-align: center; font-size: 2em;">4</td> </tr> </tbody> </table> <p style="text-align: center; margin-top: 20px;"><u>10</u> + <u>4</u> = <u>14</u></p>	tens	ones	1	4	<p>8.</p>  <table border="1" style="margin-left: auto; margin-right: auto;"> <thead> <tr> <th style="padding: 2px;">tens</th> <th style="padding: 2px;">ones</th> </tr> </thead> <tbody> <tr> <td style="text-align: center; font-size: 2em;">2</td> <td style="text-align: center; font-size: 2em;">3</td> </tr> </tbody> </table> <p style="text-align: center; margin-top: 20px;"><u>20</u> + <u>3</u> = <u>23</u></p>	tens	ones	2	3
tens	ones								
1	4								
tens	ones								
2	3								
<p>9.</p>  <table border="1" style="margin-left: auto; margin-right: auto;"> <thead> <tr> <th style="padding: 2px;">tens</th> <th style="padding: 2px;">ones</th> </tr> </thead> <tbody> <tr> <td style="text-align: center; font-size: 2em;">3</td> <td style="text-align: center; font-size: 2em;">8</td> </tr> </tbody> </table> <p style="text-align: center; margin-top: 20px;"><u>38</u> = <u>30</u> + <u>8</u></p>	tens	ones	3	8	<p>10.</p>  <table border="1" style="margin-left: auto; margin-right: auto;"> <thead> <tr> <th style="padding: 2px;">tens</th> <th style="padding: 2px;">ones</th> </tr> </thead> <tbody> <tr> <td style="text-align: center; font-size: 2em;">2</td> <td style="text-align: center; font-size: 2em;">9</td> </tr> </tbody> </table> <p style="text-align: center; margin-top: 20px;"><u>29</u> = <u>20</u> + <u>9</u></p>	tens	ones	2	9
tens	ones								
3	8								
tens	ones								
2	9								

Match.

- |                    |   |        |
|--------------------|---|--------|
| 11. 4 tens         | • | 20 + 7 |
| 12. 2 tens 7 ones  | • | 40     |
| 13. 3 more than 20 | • | 20 + 3 |
| 14. 9 ones 3 tens  | • | 30 + 2 |
| 15. 2 ones 3 tens  | • | 9 + 30 |