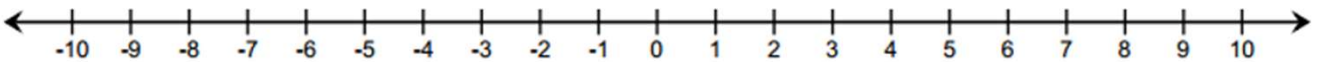


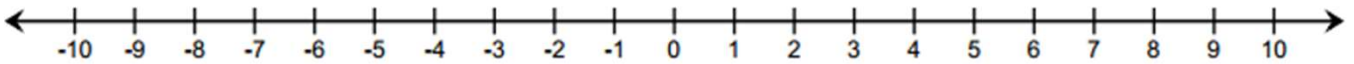
## Integer Worksheets (Number Line)

1. Calculate the following. Model your answers on the given number lines.

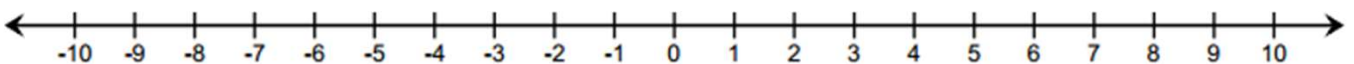
a)  $-5 + 3$



b)  $-6 + (-2)$



c)  $7 + (-8)$

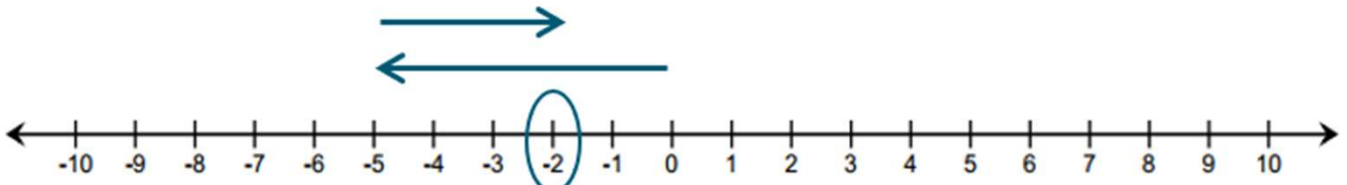


## Integer Worksheets (Number Line)

1. Calculate the following. Model your answers on the given number lines.

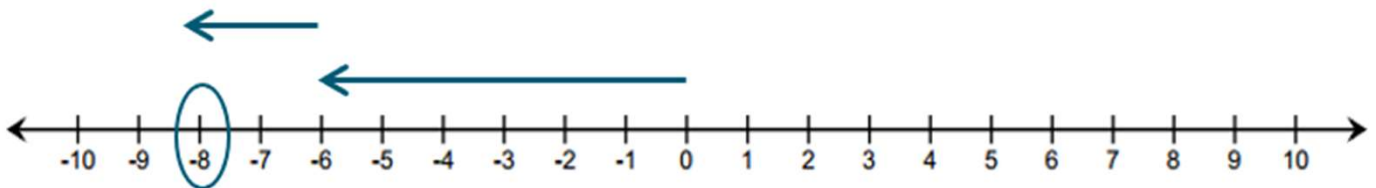
a)  $-5 + 3$

$-5 + 3 = -2$ . The sum is 3 units to the right of  $-5$ .



b)  $-6 + (-2)$

$-6 + (-2) = -8$ . The sum is 2 units to the left of  $-6$ .



c)  $7 + (-8)$

$7 + (-8) = -1$ . The sum is 8 units to the left of 7.

