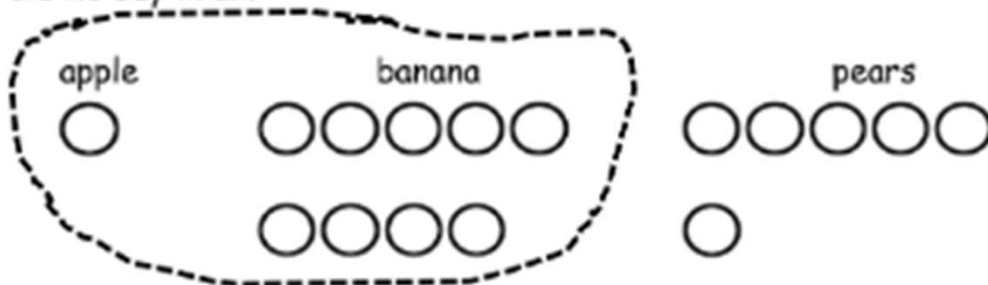


Add 3 Numbers Worksheets

Read the math story. Make a simple math drawing with labels. (Circle) 10 and solve.

1. Bill went to the store. He bought 1 apple, 9 bananas, and 6 pears. How many pieces of fruit did he buy in all?



$$\begin{array}{r} 10 \\ \hline 1 + 9 + 6 = \underline{\quad} \\ 10 + \underline{\quad} = \underline{\quad} \end{array}$$

Bill bought _____ pieces of fruit.

-
2. Maria gets some new toys for her birthday. She gets 4 dolls, 7 balls, and 3 games. How many toys did she receive?

$$\begin{array}{r} \underline{\quad} + \underline{\quad} + \underline{\quad} = \underline{\quad} \\ 10 + \underline{\quad} = \underline{\quad} \end{array}$$

Maria received _____ toys.

Add 3 Numbers Worksheets

3. Maddy goes to the pond and catches 8 bugs, 3 frogs, and 2 tadpoles. How many animals did she catch altogether?

$$\underline{\quad} + \underline{\quad} + \underline{\quad} = \underline{\quad}$$

$$10 + \underline{\quad} = \underline{\quad}$$

Maddy caught animals.

4. Molly arrived at the party first with 4 red balloons. Kenny came next with 2 green balloons. Dara came last with 6 blue balloons. How many balloons did these friends bring?

$$\underline{\quad} + \underline{\quad} + \underline{\quad} = \underline{\quad}$$

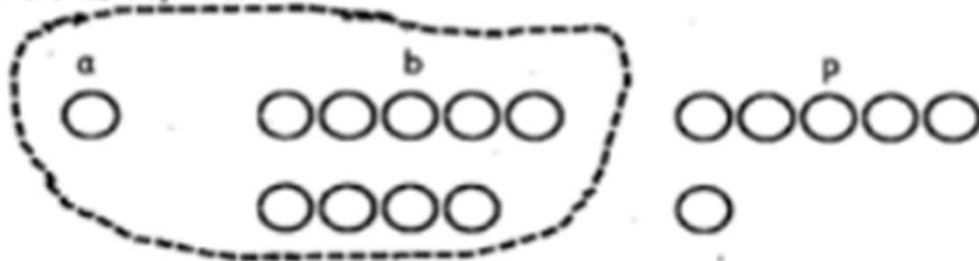
$$10 + \underline{\quad} = \underline{\quad}$$

There are balloons.

Add 3 Numbers Worksheets

Read the math story. Make a simple math drawing with labels. Circle 10 and solve.

1. Bill went to the store. He bought 1 apple, 9 bananas, and 6 pears. How many pieces of fruit did he buy in all?



$$\begin{array}{r} 10 \\ \hline 1 + 9 \\ \hline \end{array} + \frac{6}{} = \frac{16}{}$$
$$10 + \frac{6}{} = \frac{16}{}$$

Bill bought 16 pieces of fruit.

2. Maria gets some new toys for her birthday. She gets 4 dolls, 7 balls, and 3 games. How many toys did she receive?

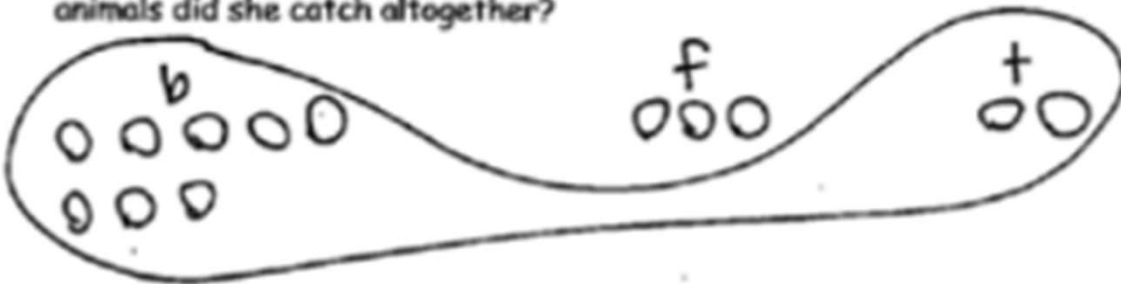


$$\frac{4}{} + \frac{7 + 3}{} = \frac{14}{}$$
$$10 + \frac{4}{} = \frac{14}{}$$

Maria received 14 toys.

Add 3 Numbers Worksheets

3. Maddy goes to the pond and catches 8 bugs, 3 frogs, and 2 tadpoles. How many animals did she catch altogether?



$$\begin{array}{r} \textcircled{8} + \underline{3} + \textcircled{2} = \underline{13} \\ 10 + \underline{3} = \underline{13} \end{array}$$

Maddy caught 13 animals.

-
4. Molly arrived at the party first with 4 red balloons. Kerry came next with 2 green balloons. Dara came last with 6 blue balloons. How many balloons did these friends bring?



$$\begin{array}{r} \textcircled{4} + \underline{2} + \textcircled{6} = \underline{12} \\ 10 + \underline{2} = \underline{12} \end{array}$$

There are 12 balloons.