


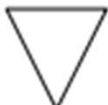
## 2D Shapes Worksheets

Write the number of corners and sides that each shape has. Then match the shape to its name. Remember that some special shapes may have more than one name.


1.   
\_\_\_ corners  
\_\_\_ straight sides

triangle


circle

2.   
\_\_\_ corners  
\_\_\_ straight sides

rectangle

3.   
\_\_\_ corners  
\_\_\_ straight sides


hexagon


4.   
\_\_\_ corners  
\_\_\_ straight sides


square


## 2D Shapes Worksheets

Write the number of corners and sides that each shape has. Then match the shape to its name. Remember that some special shapes may have more than one name.

1.   
   0   corners  
   0   straight sides

2.   
   3   corners  
   3   straight sides

3.   
   6   corners  
   6   straight sides

4.   
   4   corners  
   4   straight sides

triangle

circle

rectangle

hexagon

square

