

NAME \_\_\_\_\_

DATE \_\_\_\_\_

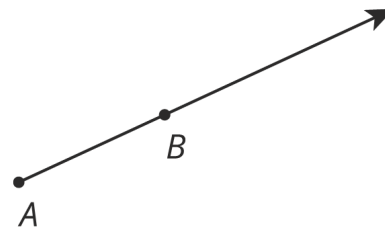
PERIOD \_\_\_\_\_

# Unit 2, Lesson 3: Dilations with no Grid

Let's dilate figures not on grids.

## 3.1: Points on a Ray

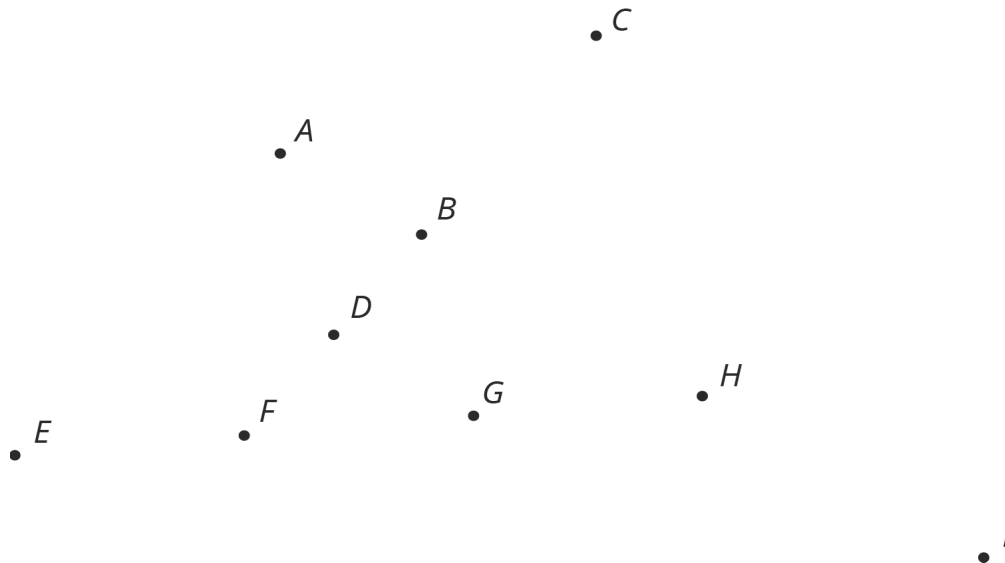
1. Find and label a point  $C$  on the ray whose distance from  $A$  is twice the distance from  $B$  to  $A$ .
2. Find and label a point  $D$  on the ray whose distance from  $A$  is half the distance from  $B$  to  $A$ .



## 3.2: Dilation Obstacle Course

Here is a diagram that shows nine points.

[m.openup.org/1/8-2-3-2](https://m.openup.org/1/8-2-3-2)



1. Dilate  $B$  using a scale factor of 5 and  $A$  as the center of dilation. Which point is its image?
2. Using  $H$  as the center of dilation, dilate  $G$  so that its image is  $E$ . What scale factor did you use?
3. Using  $H$  as the center of dilation, dilate  $E$  so that its image is  $G$ . What scale factor did you use?
4. To dilate  $F$  so that its image is  $B$ , what point on the diagram can you use as a center?

NAME \_\_\_\_\_

DATE \_\_\_\_\_

PERIOD \_\_\_\_\_

5. Dilate  $H$  using  $A$  as the center and a scale factor of  $\frac{1}{3}$ . Which point is its image?

6. Describe a dilation that uses a labeled point as its center and that would take  $F$  to  $H$ .

7. Using  $B$  as the center of dilation, dilate  $H$  so that its image is itself. What scale factor did you use?

### 3.3: Getting Perspective

m.openup.org/1/8-2-3-3



1. Using one colored pencil, draw the images of points  $P$  and  $Q$  using  $C$  as the center of dilation and a scale factor of 4. Label the new points  $P'$  and  $Q'$ .

2. Using a different color, draw the images of points  $P$  and  $Q$  using  $C$  as the center of dilation and a scale factor of  $\frac{1}{2}$ . Label the new points  $P''$  and  $Q''$ .




Pause here so your teacher can review your diagram. Your teacher will then give you a scale factor to use in the next part.

NAME

DATE

PERIOD

3. Now you'll make a perspective drawing. Here is a rectangle.



- Choose a point *inside the shaded circular region* but *outside the rectangle* to use as the center of dilation. Label it  $C$ .
- Using your center  $C$  and the scale factor you were given, draw the image under the dilation of each vertex of the rectangle, one at a time. Connect the dilated vertices to create the dilated rectangle.
- Draw a segment that connects each of the original vertices with its image. This will make your diagram look like a cool three-dimensional drawing of a box! If there's time, you can shade the sides of the box to make it look more realistic.
- Compare your drawing to other people's drawings. What is the same and what is different? How do the choices you made affect the final drawing? Was your dilated rectangle closer to  $C$  than to the original rectangle, or farther away? How is that decided?

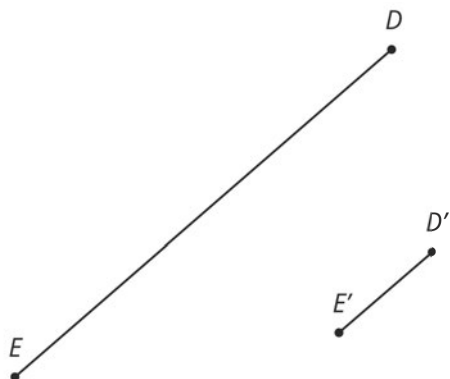
NAME \_\_\_\_\_

DATE \_\_\_\_\_

PERIOD \_\_\_\_\_

**Are you ready for more?**

Here is line segment  $DE$  and its image  $D'E'$  under a dilation.



1. Use a ruler to find and draw the center of dilation. Label it  $F$ .
2. What is the scale factor of the dilation?

**Lesson 3 Summary**

If  $A$  is the center of dilation, how can we find which point is the dilation of  $B$  with scale factor 2?



Since the scale factor is larger than 1, the point must be farther away from  $A$  than  $B$  is, which makes  $C$  the point we are looking for. If we measure the distance between  $A$  and  $C$ , we would find that it is exactly twice the distance between  $A$  and  $B$ .

A dilation with scale factor less than 1 brings points closer. The point  $D$  is the dilation of  $B$  with center  $A$  and scale factor  $\frac{1}{3}$ .


NAME \_\_\_\_\_

DATE \_\_\_\_\_

PERIOD \_\_\_\_\_

## Unit 2, Lesson 3: Dilations with no Grid

- Segment  $AB$  measures 3 cm. Point  $O$  is the center of dilation. How long is the image of  $AB$  after a dilation with . . .
  - Scale factor 5?
  - Scale factor 3.7?
  - Scale factor  $\frac{1}{5}$ ?
  - Scale factor  $s$ ?
- Here are points  $A$  and  $B$ . Plot the points for each dilation described.



- $C$  is the image of  $B$  using  $A$  as the center of dilation and a scale factor of 2.
  - $D$  is the image of  $A$  using  $B$  as the center of dilation and a scale factor of 2.
  - $E$  is the image of  $B$  using  $A$  as the center of dilation and a scale factor of  $\frac{1}{2}$ .
  - $F$  is the image of  $A$  using  $B$  as the center of dilation and a scale factor of  $\frac{1}{2}$ .
- Make a perspective drawing. Include in your work the center of dilation, the shape you dilate, and the scale factor you use.
  - Triangle  $ABC$  is a scaled copy of triangle  $DEF$ . Side  $AB$  measures 12 cm and is the longest side of  $ABC$ . Side  $DE$  measures 8 cm and is the longest side of  $DEF$ .
    - Triangle  $ABC$  is a scaled copy of triangle  $DEF$  with what scale factor?

NAME \_\_\_\_\_

DATE \_\_\_\_\_

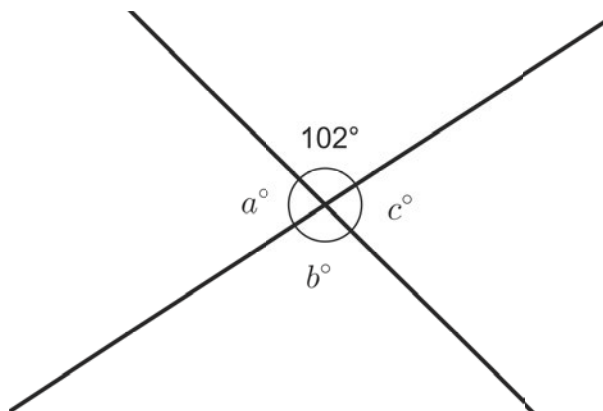
PERIOD \_\_\_\_\_

b. Triangle  $DEF$  is a scaled copy of triangle  $ABC$  with what scale factor?

(from Unit 2, Lesson 1)

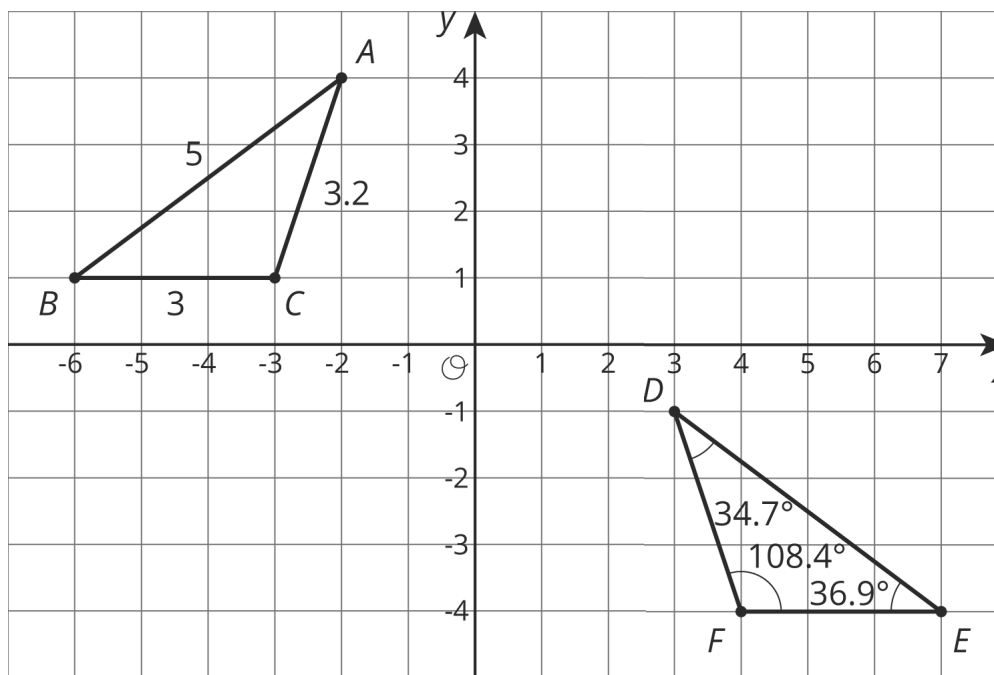
5. The diagram shows two intersecting lines.

Find the missing angle measures.



(from Unit 1, Lesson 14)

6. a. Show that the two triangles are congruent.  
 b. Find the side lengths of  $DEF$  and the angle measures of  $ABC$ .



---

NAME

DATE

PERIOD

(from Unit 1, Lesson 12)